




## Can You See It?


Write the numbers you see with a . . .

**A.**




sum of **5** and  
difference of **1**.

**B.**




sum of **17** and  
difference of **7**.

**C.**




sum of **14** and  
difference of **2**.

**D.**




sum of **18** and  
difference of **4**.

**E.**




sum of **12** and  
difference of **2**.

**F.**



sum of **15** and  
difference of **9**.

**G.**




sum of **5** and  
difference of **3**.

**H.**




sum of **18** and  
difference of **2**.

**I.**



sum of **13** and  
difference of **5**.

**J.**



sum of **16** and  
difference of **6**.



Make your own number glasses.

sum of \_\_\_\_\_ and

difference of \_\_\_\_\_

