




# From Sea to Sea

Look at the number on each form of transportation. Write the number of tens and ones. Regroup. Write the new number.



  3   tens  
  7   ones

Trade 1 ten  
for 10 ones.

  2   tens  
 17  ones



\_\_\_\_ tens  
\_\_\_\_ ones

Trade 1  
ten for 10  
ones.


\_\_\_\_ tens  
\_\_\_\_ ones



\_\_\_\_ tens  
\_\_\_\_ ones

Trade 1  
ten for 10  
ones.

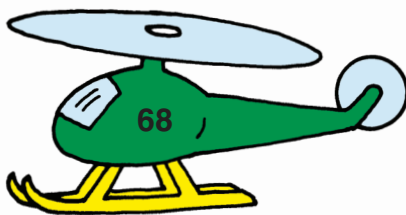
\_\_\_\_ tens  
\_\_\_\_ ones



\_\_\_\_ tens  
\_\_\_\_ ones

Trade 1 ten  
for 10 ones.

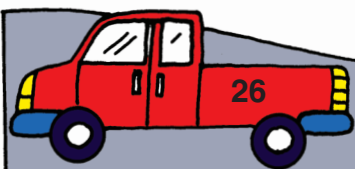
\_\_\_\_ tens  
\_\_\_\_ ones



\_\_\_\_ tens  
\_\_\_\_ ones

Trade 1 ten  
for 10 ones.

\_\_\_\_ tens  
\_\_\_\_ ones



\_\_\_\_ tens  
\_\_\_\_ ones

Trade 1  
ten for 10  
ones.

\_\_\_\_ tens  
\_\_\_\_ ones