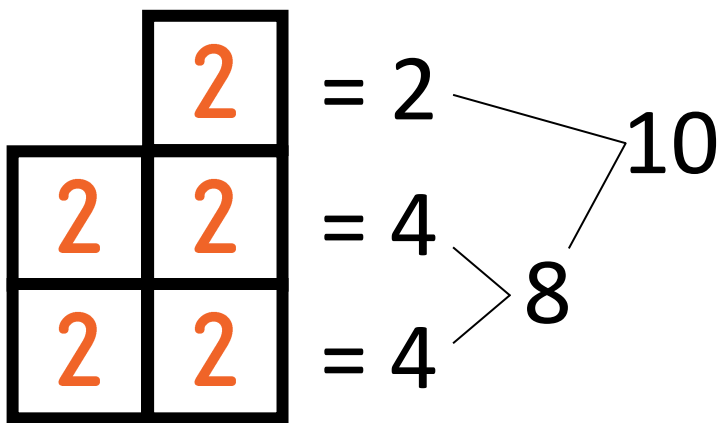


Multiplication

Equal Groups

Sara has 5 bags of cookies. There are 2 cookies in each bag.
How many cookies does Sara have all together?




$$5 \times 2 = 10$$

Comparison

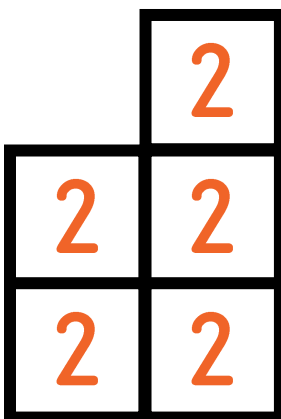
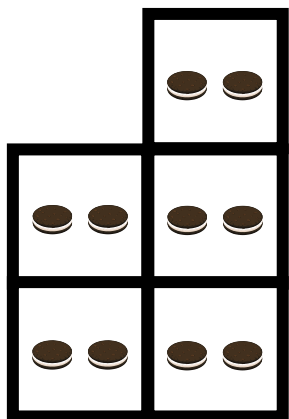
Sara has 5 times as many cookies as Raul. Raul has 2 cookies.
How many cookies does Sara have?

Raul



$$= 2$$

Sara



$$= 2$$

$$= 4$$

$$= 4$$

8

10

$$S = 5 \times R$$

$$R = \frac{1}{5} \times S$$