

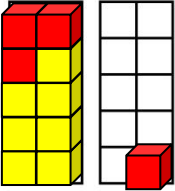
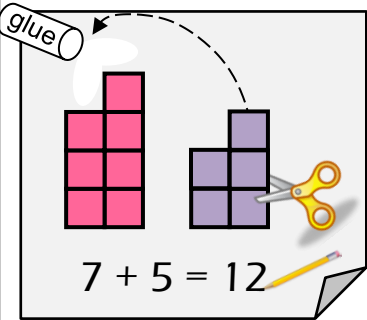
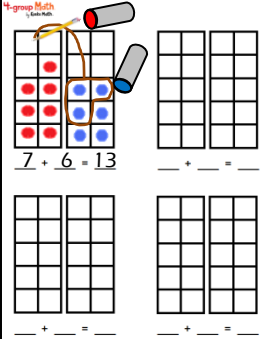
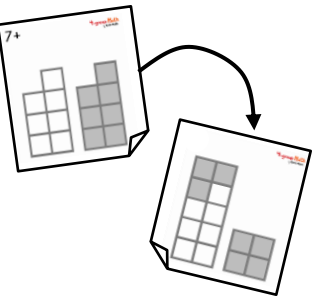
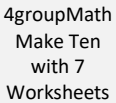
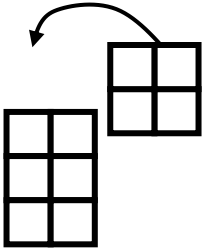

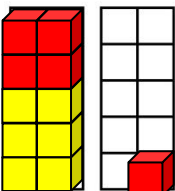
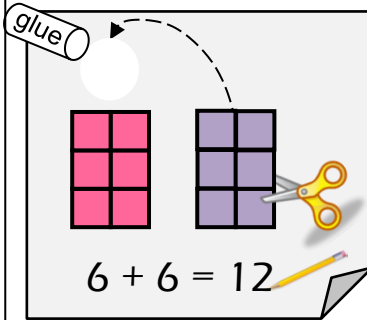
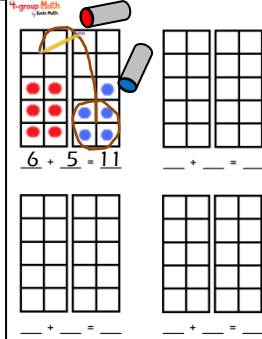
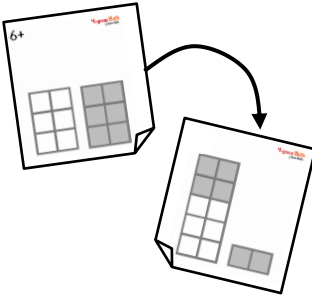
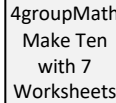


Name _____		
$9 + \underline{\quad} = \underline{\quad}$		
<p>Build your equations here:</p> <p>Write your equations here:</p> $9 + 2 = 11$ _____ _____ _____ _____ _____ _____ _____ _____ _____ _____	<p>Make Ten Block Board</p>	
<p>$9 + 3 = 12$</p>		<p>Ten-Frames to Cut Out</p>
<p>$9 + 4 = 13$</p>		<p>Make Ten Recording Sheet</p>
		<p>Make Ten Flip Cards</p>
<p>4groupMath Make Ten with 9 Worksheets</p>	<p>Test:</p> <p>Write your equations.</p>	<p>You passed.</p> <p>Yeah!</p>

Name _____		
$8 + \underline{\quad} = \underline{\quad}$		
<p>Build your equations here:</p> <p>Write your equations here:</p> $8 + 3 = 11$ _____ _____ _____ _____ _____ _____ _____ _____ _____ _____	<p>Make Ten Block Board</p>	
<p>$8 + 4 = 12$</p>		<p>Ten-Frames to Cut Out</p>
<p>$8 + 5 = 13$</p>		<p>Make Ten Recording Sheet</p>
		<p>Make Ten Flip Cards</p>
<p>4groupMath Make Ten with 8 Worksheets</p>	<p>Test:</p> <p>Write your equations.</p>	<p>You passed.</p> <p>Yeah!</p>

Name _____		
$7 + \underline{\quad} = \underline{\quad}$		
 <p>Build your equations here:</p>  <p>Write your equations here:</p> $7 + 4 = 11$ _____ _____ _____ _____ _____ _____ _____ _____ _____ _____	Make Ten Block Board	
 <p>$7 + 5 = 12$</p>	Ten-Frames to Cut Out	
 <p>$7 + 6 = 13$</p> <p>_____</p> <p>_____</p> <p>_____</p> <p>_____</p>	Make Ten Small Recording Sheet	
		Make Ten Flip Cards
 <p>4groupMath Make Ten with 7 Worksheets</p>	Test: Write your equations.	You passed. Yeah!

Name _____		
$6 + \underline{\quad} = \underline{\quad}$		
 <p>Build your equations here:</p>  <p>Write your equations here:</p> $6 + 5 = 11$ _____ _____ _____ _____ _____ _____ _____ _____ _____ _____	Make Ten Block Board	
 <p>$6 + 6 = 12$</p>	Ten-Frames to Cut Out	
 <p>$6 + 5 = 11$</p> <p>_____</p> <p>_____</p> <p>_____</p> <p>_____</p>	Make Ten Small Recording Sheet	
		Make Ten Flip Cards
 <p>4groupMath Make Ten with 7 Worksheets</p>	Test: Write your equations.	You passed. Yeah!