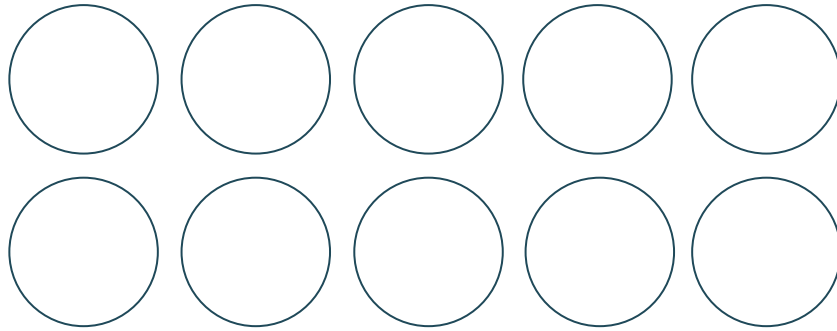


Fractions

Year 2 / P3


Activity 1

There are ten marbles, colour in half of them.



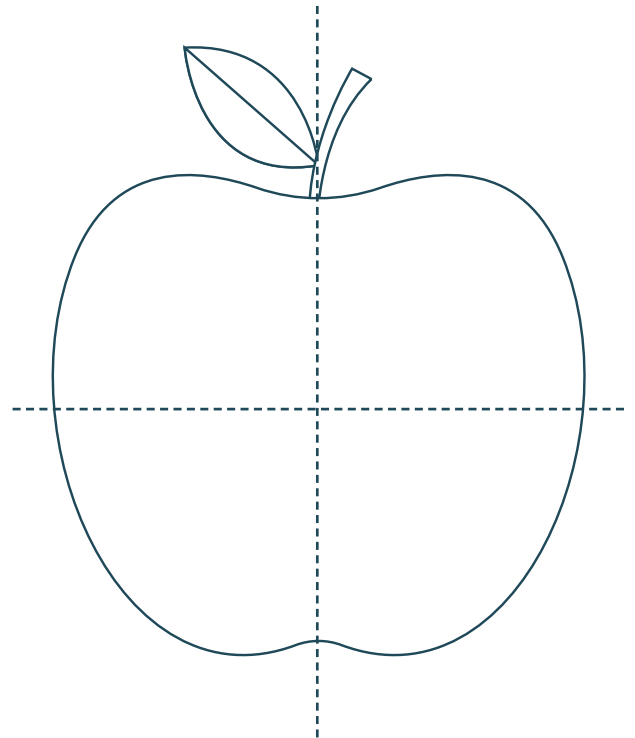
Activity 2

Colour in half the apple.



Activity 3

Colour in two quarters of the apple.



Fractions

Year 2 / P3

Activity 4

Is $\frac{1}{2}$ and $\frac{2}{4}$ the same or different? _____

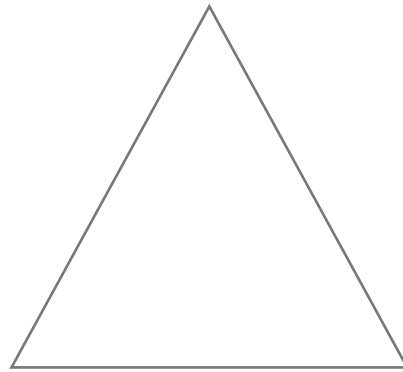
Split the line in half, this means 2 parts.



Split the line into quarters, this means 4. parts.

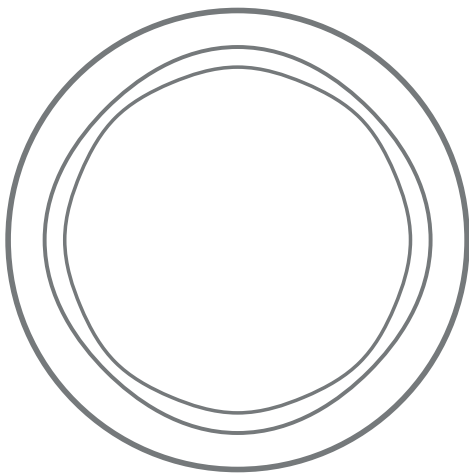


Split the triangle into quarters, then colour $\frac{3}{4}$ s of it.



Activity 5

Pizza challenge! Split this pizza into equal parts. One for each person in your family



- Colour 1 piece in for you.
- What fraction of the cake do you have?

TIP!

| | |
|------------------|--|
| <u>Numerator</u> | (how many pieces are yours) |
| Denominator | (how many pieces there are altogether) |