

# Test Book

Levels 1-3 Maths, English, VR & NVR



**Name:**

# CONTENTS

**All children will complete Part A of each review test. Only children being taught non-verbal reasoning as part of their course planner will complete Part B.**

Test	Topics Covered	Page no.	Score
Review Test 1 Part A	Move a Letter, Arithmetic, Nouns, Probability	Page 4–6	
Review Test 1 Part B	NVR Similarities	Page 7–8	
Review Test 2 Part A	Missing Word, 2D Shapes, Spelling, Number Series	Page 10–12	
Review Test 2 Part B	NVR Odd One Out	Page 13	
Review Test 3 Part A	Word Connections, Special Numbers, Comprehension, Adjectives	Page 15–19	
Review Test 3 Part B	3D Cube to Net	Page 20–21	
Review Test 4 Part A	Closest & Opposite Meaning, Factors & Multiples, Verbs, Perimeter & Area	Page 23–26	
Review Test 4 Part B	NVR Analogies	Page 27–28	
Review Test 5 Part A	Letter Series, Place Value, Alliteration & Onomatopoeia, Insert a Letter	Page 30–33	
Review Test 5 Part B	2D Composite Shapes	Page 34–35	
Review Test 6 Part A	Reading for Information, Symmetry, Vocabulary in Context, Writing Features	Page 37–42	
Review Test 6 Part B	NVR Matrices	Page 43–44	
Review Test 7 Part A	Jumbled Sentences, Fractions, Direct & Reported Speech, Problem Solving	Page 46–49	
Review Test 7 Part B	3D Plan Views	Page 50–51	
Review Test 8 Part A	Anagrams, Decimals, Comprehension, Compound Words	Page 53–57	
Review Test 8 Part B	NVR Codes	Page 58–59	
Review Test 9 Part A	Related Words, Percentages, Tenses, Same Meaning, Interpreting Data, Letter for Number	Page 61–65	
Review Test 9 Part B	NVR Series	Page 66–67	
Full Course Review Part A	Selection of topics from across the course	Page 69–75	
Full Course Review Part B	Selection of topics from across the NVR course	Page 76–78	
Course Reflections		Page 79	

# ANSWER GUIDES

There is dedicated time within each course planner to mark and review each test.

Most of the level 1-3 tests will be marked within the session that they are completed.

If you would like access to the answers for each of the tests within this book, please scan the QR code below.



**SCAN ME TO FIND THE ANSWERS TO ALL  
TESTS IN THIS BOOK.**

## **What is a review test?**

You will complete regular review tests throughout this course. Each review test will last either 20 or 25 minutes and will then be marked and reviewed with your tutor. **PLEASE DO NOT COMPLETE ANY OF THESE TESTS AT HOME.** The review tests are designed to:

- Check for learning of concepts covered.
- Highlight areas of strength and areas for additional practice.
- Practise exam techniques learnt in lessons under exam conditions.

## **Which tests should I complete?**

Your tutor will direct you to **complete the relevant sections** depending on the course planner you are following and the exam you are preparing for.

**All children will complete Part A** of each 'review test', but only some children will be required to complete Part B of the 'review test', which contains non-verbal reasoning questions. Only children being taught non-verbal reasoning in their 'course planner sessions' will be required to complete these questions.

Just like in any exam, you may be faced with questions that you have not yet been taught. Have a good go at these questions and use the **'topic practice'** area of Compass for **further practice** if needed.

## **Marking and Feedback**

Once you have completed a 'review test' you will mark it alongside your tutor. Add your score next to each test in the contents table on Page 1.

Reflecting helps you to develop your skills and review their effectiveness. To be self-aware is to be able to realistically assess your strengths, areas for development and set goals, while maintaining a positive mindset. You will get some time after each test for self-reflection and an opportunity to use Compass to work on any tricky topics from the test.

## **Exam 'Top Tips'**

- **Listen carefully** – to any explanations or instructions you are given.
- **Work accurately** – you may have optional answers, so choose the most reasonable answer if you don't know for sure.
- **Move on if stuck** – if you are stuck on a question, move on. Remember, you need to complete enough questions to score well.
- **Read questions carefully** – including instructions on how to answer questions.
- **Work speedily** – often the biggest challenge in the exam is completing enough questions to gain top marks.
- **Don't stop!** – Use all the time you are given. If you finish before the time is up, use this time to check your answers are accurate.



## REVIEW TEST 1 PART A

You have 20 minutes to complete Part A of the review test.

### VR Move a Letter

Remove **one** letter from the word below to create a new word. The letters **must not** be rearranged and the new word must make sense. Circle the letter that should be removed.

1. **blind**

A. b

B. l

C. i

D. n

E. d

In the questions below, move **one** letter from the word on the left to the word on the right, to create **two** new words. The letters **must not** be rearranged. Both new words must make sense. Circle the letter that moves.

2. **tend she**

A. t

B. e

C. n

D. d

3. **pink ace**

A. p

B. i

C. n

D. k

4. **speak now**

A. s

B. p

C. e

D. a

E. k

5. **learn shot**

A. l

B. e

C. a

D. r

E. n

### Arithmetic

In the questions below, choose the correct mathematical sign or number to complete the calculation.

6.  $24 \square 3 = 72$

A. +

B. -

C. ÷

D. ×

E. >

7.  $\square \div 9 = 6$

A. 45

B. 48

C. 54

D. 56

E. 63

8.  $125 - \square = 36$

A. 83

B. 85

C. 87

D. 89

E. 91

9.  $2 \times 6 + \square = 80$

A. 60

B. 68

C. 54

D. 62

E. 46

10.  $\square + 24 - 52 = 119$

A. 130

B. 138

C. 142

D. 145

E. 147

## Nouns

Choose the correct **collective noun** for the plural noun below. Circle the correct answer.

### 11. birds

A. gaggle

B. herd

C. school

D. flock

E. flight

In the questions below, identify the abstract noun in the sentence. Circle the correct answer.

12. I am starting to lose faith in the service at my favourite restaurant.

A. starting

B. lose

C. faith

D. service

E. restaurant

13. Tegan has a fear of poisonous snakes.

A. Tegan

B. fear

C. of

D. poisonous

E. snakes

In the questions below, select the type of noun for the word in bold. Circle the correct answer.

14. Farhad travelled to **Tehran**, the capital city of Iran, to visit friends.

A. abstract

B. proper

C. common

D. collective

E. concrete

15. Mona was sure she could see a **planet** through her new telescope.

A. abstract

B. proper

C. common

D. collective

E. concrete

## Probability

16. What is the probability you will pick a diamond card from a deck of 52 cards, in its simplest form?
- A.  $\frac{1}{2}$       B.  $\frac{39}{52}$       C.  $\frac{1}{4}$       D.  $\frac{13}{52}$       E.  $\frac{1}{8}$
17. The names of the months of the year are in a bag. What is the probability of choosing a month beginning with J?
- A.  $\frac{1}{12}$       B.  $\frac{1}{2}$       C.  $\frac{1}{6}$       D.  $\frac{2}{6}$       E.  $\frac{1}{4}$
18. The names of the days of the week are in a bag. What is the probability of choosing a day beginning with T?
- A.  $\frac{2}{7}$       B.  $\frac{5}{7}$       C.  $\frac{6}{7}$       D.  $\frac{3}{7}$       E.  $\frac{4}{7}$
19. A box contains 2 orange marbles, 3 white marbles, 4 green marbles and 1 purple marble. What is the probability of selecting an orange marble if the purple marble is removed?
- A.  $\frac{1}{5}$       B.  $\frac{2}{9}$       C.  $\frac{1}{3}$       D.  $\frac{2}{10}$       E.  $\frac{4}{9}$
20. Describe the probability of a coin landing on heads rather than tails.
- A. impossible      B. very unlikely      C. equal      D. very likely      E. certain



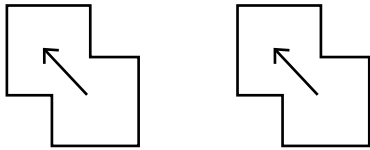
## REVIEW TEST 1 PART B

You have 5 minutes to complete Part B of the review test.

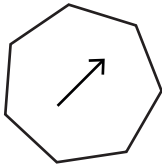
### NVR Similarities

In the questions below, choose the figure that is most closely similar to the clue figures.


1.



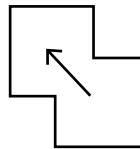
A.




B.



C.



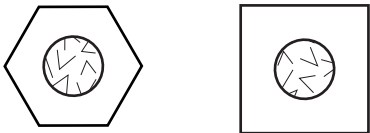
D.



E.



2.



A.



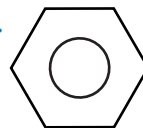
B.




C.



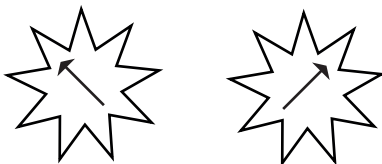
D.



E.



3.




A.




B.




C.



D.

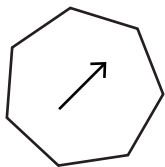


E.





4.



A.



B.



C.




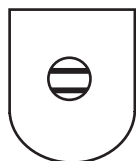
D.



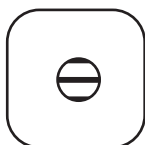
E.



5.



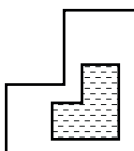
A.



B.



C.



D.



E.





## SELF-REFLECTION

Take some time to reflect on your review test experience. Although they may sometimes feel stressful, exams can also be valuable learning opportunities.

### Your preparation

How confident did you feel going into the exam?



### Your performance

Did you have enough time to answer all the questions in the exam?

☐  
yes☐  
no

#### Which topic were you most confident answering?

VR Move a Letter

Arithmetic

Nouns

Probability

NVR Similarities

#### Which topic would you like more practice on?

VR Move a Letter

Arithmetic

Nouns

Probability

NVR Similarities

### What might you do differently next time?

In preparation for your next exam, write down one thing you will keep doing and one thing you will change for next time.

Keep	Change
<div></div>	<div></div>



## REVIEW TEST 2 PART A

You have 20 minutes to complete Part A of the review test.

### VR Missing Word

Which of the following **two** words have a three-letter word underlined within them?

1.     A. company     B. patient     C. partner     D. opening     E. expense

In the sentences below, one word in capitals has had **three consecutive letters taken out**. These three letters on their own make **one correctly spelt word**, without changing the order. Choose the three-letter word from the options below.

2.     You never know what's going to HAP when they get together.

          A. pan                      B. pin                      C. pop                      D. pen                      E. hip

3.     There is expected to be a heated DEB in parliament today.

          A. eat                      B. ate                      C. are                      D. toe                      E. ape

4.     The company has a BUD of £1m for advertising.

          A. got                      B. tie                      C. get                      D. pie                      E. lie

5.     The evidence came from a reliable SCE.

          A. are                      B. out                      C. oar                      D. our                      E. art

### 2D Shapes: Triangles, Quadrilaterals & Polygons

Questions 6 and 7 refer to the shape below.



6.     What is the name of this regular polygon?

          A. heptagon     B. octagon     C. hexagon     D. pentagon     E. nonagon

7. How many vertices does the shape have?

A. 0

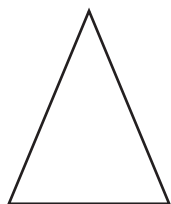
B. 2

C. 3

D. 5

E. 6

8. What type of triangle is shown below?



A. equilateral

B. right angle

C. isosceles

D. scalene

9. Complete the sentence below. Choose the correct answer from the options.

**All angles in a triangle add up to \_\_\_\_\_.**

A.  $160^\circ$

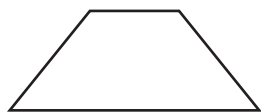
B.  $180^\circ$

C.  $190^\circ$

D.  $90^\circ$

E.  $360^\circ$

10. Complete the table below to show the **properties of a trapezium**. Put a tick or a cross to show whether the statements are true or false. The first one has been done for you.



	True	False
Has 4 sides	✓	
Has 4 vertices		
Has 4 acute-angled corners		
Has 2 pairs of parallel lines		
Has no perpendicular lines		

### Spelling: Prefixes, Suffixes & Roots

What is the **root word** in the word below? Circle your answer.

11. **misunderstand**

A. understand

B. mis

C. and

D. stand

E. under

In the questions below, circle the correct prefix for the underlined word in the sentence.

12. The rainbow didn't last long. I wonder if this rain will make it appear.

- A. mis                      B. re                      C. pre                      D. ir                      E. un

13. They were happy with their results, after all the hard work they had put in.

- A. mis                      B. re                      C. dis                      D. ir                      E. un

In the questions below, circle the correct suffix for the underlined word in the sentence.

14. I lost the game because of many care mistakes.

- A. less                      B. ful                      C. ly                      D. ment                      E. ness

15. The neighbourhood is fear of rising crime in the area.

- A. less                      B. ful                      C. ly                      D. ment                      E. ness

### VR Number Series

In the questions below, find the number that continues the series in the most sensible way.

16. 24, 32, 40, 48, 56, ?

- A. 80                      B. 64                      C. 72                      D. 88                      E. 62

17. 43, 49, 55, 61, 67, ?

- A. 71                      B. 70                      C. 79                      D. 73                      E. 75

18. 96, 85, 74, 63, 52, ?

- A. 45                      B. 49                      C. 38                      D. 40                      E. 41

19. 3, 8, 6, 16, 9, ?

- A. 24                      B. 19                      C. 12                      D. 32                      E. 15

20. 24, 27, 25, 28, 26, ?

- A. 24                      B. 30                      C. 29                      D. 28                      E. 32


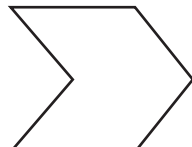

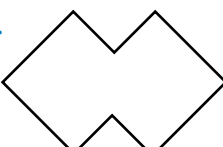


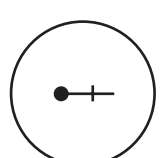
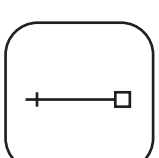
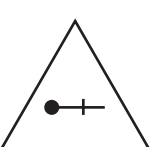
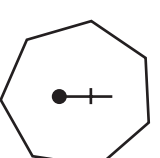
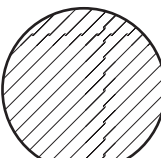
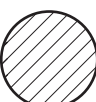
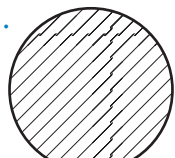
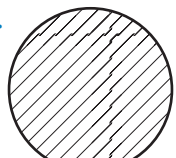
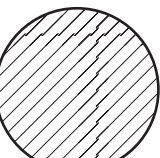

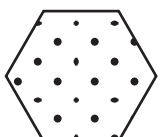


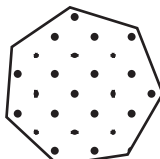







## REVIEW TEST 2 PART B

You have 5 minutes to complete Part B of the review test.

### NVR Odd One Out

In the questions below, circle the figure that is the **odd one out**.

1. A.  B.  C.  D.  E. 
2. A.  B.  C.  D.  E. 
3. A.  B.  C.  D.  E. 
4. A.  B.  C.  D.  E. 
5. A.  B.  C.  D.  E. 



## SELF-REFLECTION

Take some time to reflect on your review test experience. Although they may sometimes feel stressful, exams can also be valuable learning opportunities.

### Your preparation

How confident did you feel going into the exam?



### Your performance

Did you have enough time to answer all the questions in the exam?

☐  
yes☐  
no

#### Which topic were you most confident answering?

VR Missing Word

2D Shapes

Prefixes, Suffixes & Roots

VR Number Series

NVR Odd One Out

#### Which topic would you like more practice on?

VR Missing Word

2D Shapes

Prefixes, Suffixes & Roots

VR Number Series

NVR Odd One Out

### What might you do differently next time?

In preparation for your next exam, write down one thing you will keep doing and one thing you will change for next time.

Keep	Change
<div></div>	<div></div>



## REVIEW TEST 3 PART A

You have 20 minutes to complete Part A of the review test.

### VR Word Connections

1. Each pair of words below is connected in the same way. Select the answer that best describes the relationship between the first word and the second word.

Word 1	Word 2
mistake	error
select	choose

- A. The second word is the infant form of the first word.
- B. The second word has the same meaning as the first word.
- C. The second word is an antonym for the first word.
- D. The second word is the same as the first word but with one letter removed.

In the questions below, find the word that will complete the sentence in the best way.

2. **Dog** is to puppy, as **cow** is to (lamb chick calf kitten cub)

A. lamb      B. chick      C. calf      D. kitten      E. cub

3. **Aisle** is to isle, as **reign** is to (island rainbow queen rain king)

A. island      B. rainbow      C. queen      D. rain      E. king

In the questions below, find the **two** words, one from each group, that will complete the sentence in the best way. Circle the **two** words, one from each list, from the options below.

4. **Bitter** is to (sour sweet fizzy) as **blunt** is to (knife salty sharp)

sour

knife

sweet

salty

fizzy

sharp



5. **Bee** is to (troop hive swarm) as **fish** is to (school pod dolphin)

troop

school

hive

pod

swarm

dolphin

### Special Numbers: Prime Numbers, Roman Numerals & Negative Numbers

6. Complete the number series below with the next **prime number**.

7, 11, 13, 17, 19, ?

A. 21

B. 23

C. 25

D. 27

E. 29

7. Complete the table below to show whether the numbers are prime, or not.

	Prime	Not Prime
7		
10		
11		
15		
17		

8. Which list of integers below is in the correct numerical order, from smallest on the left to largest on the right?

A. -7, -9, 1, -2, 3

B. -9, -7, -2, 1, 3

C. 1, -2, 3, -7, -9

D. 3, 1, -2, -7, -9

9. Which of the options below is the Roman numeral for **52**?

A. LII

B. LXII

C. XLII

D. ILL

E. XXXII

10. Draw lines to match the Roman numerals to their numbers.

75	XXI
97	LXXV
21	XCVII

## Comprehension

Read the extract from *Alice's Adventures in Wonderland* below and answer the questions that follow.

**You may want to refer back to the active reading technique and begin by reading the questions first. Knowing the questions you have to answer before you read a text may help you focus.**

### **From *Alice's Adventures in Wonderland* by Lewis Carroll**

The rabbit-hole went straight on like a tunnel for some way, and then dipped suddenly down, so suddenly that Alice had not a moment to think about stopping herself before she found herself falling down what seemed to be a very deep well.

Either the well was very deep, or she fell very slowly, for she had plenty of time as she went down to look about her, and to wonder what was going to happen next. First, she tried to look down and make out what she was coming to, but it was too dark to see anything; then she looked at the sides of the well and noticed that they were filled with cupboards and book-shelves: here and there she saw maps and pictures hung upon pegs. She took down a jar from one of the shelves as she passed; it was labelled "ORANGE MARMALADE," but to her disappointment it was empty; she did not like to drop the jar for fear of killing somebody underneath, so managed to put it into one of the cupboards as she fell past it.

"Well!" thought Alice to herself. "After such a fall as this, I shall think nothing of tumbling down stairs! How brave they'll all think me at home! Why, I wouldn't say anything about it, even if I fell off the top of the house!" (Which was very likely true.)

Down, down, down. Would the fall never come to an end? "I wonder how many miles I've fallen by this time?" she said aloud. "I must be getting somewhere near the centre of the earth. Let me see: that would be four thousand miles down. I think—" (for, you see, Alice had learnt several things of this sort in her lessons in the schoolroom, and though this was not a very good opportunity for showing off her knowledge, as there was no one to listen to her, still it was good practice to say it over).

**11.** Circle the example of a simile used by the author in the first paragraph.

- A. then dipped suddenly down
- B. the rabbit-hole went straight on like a tunnel
- C. suddenly that Alice had not a moment to think
- D. stopping herself before she found herself falling
- E. down what seemed to be a very deep well

- 12.** Why could Alice not see anything as she was falling?
- A. She was blindfolded.
  - B. She was falling too quickly.
  - C. Shelves were blocking her view.
  - D. It was too dark.
  - E. There was nothing to see.
- 13.** What did Alice notice in the cupboards and book-shelves?
- A. maps and jam jars
  - B. pegs and rabbits
  - C. pictures and books
  - D. clocks and plants
  - E. maps and pictures
- 14.** What did Alice do with the jar of marmalade after finding it was empty?
- A. Dropped it down the well.
  - B. Gave it to her cat.
  - C. Put it into one of the cupboards.
  - D. Hung it on a peg.
  - E. Let it tumble down the stairs.
- 15.** What makes Alice think she is near the centre of the earth?
- A. She has been falling for so long.
  - B. It is hot like the sun.
  - C. She has learnt about it at school.
  - D. She can see signposts for the centre of the earth.
  - E. She can see lava.

## Adjectives

In the questions below, choose the word that is the adjective in the sentence.

16. She wore a beautiful dress to her friend's wedding.

- A. wore      B. beautiful      C. dress      D. friend's      E. wedding

17. He stood out in a red shirt.

- A. He      B. stood      C. out      D. red      E. shirt

18. They saw him with their own eyes.

- A. They      B. saw      C. him      D. their      E. own

19. She spoke so fast, I couldn't keep up!

- A. spoke      B. so      C. fast      D. couldn't      E. keep

20. The baby looked adorable when he was sleeping.

- A. baby      B. looked      C. adorable      D. was      E. sleeping

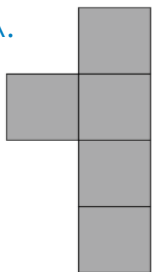

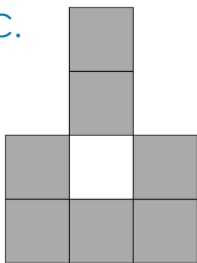
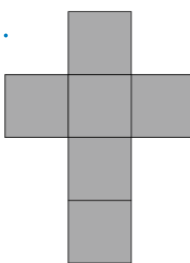
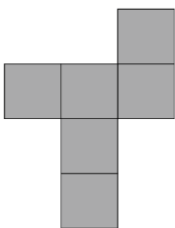
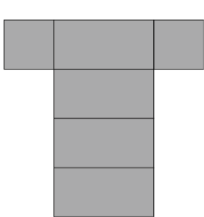
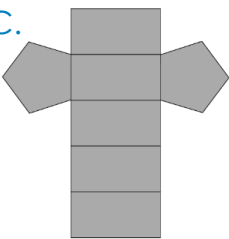
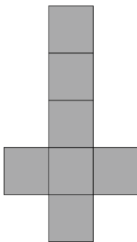


## REVIEW TEST 3 PART B

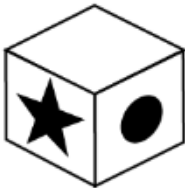
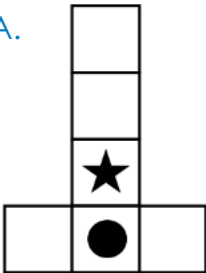
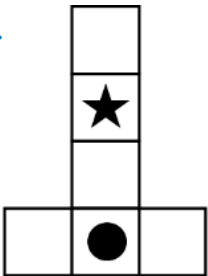

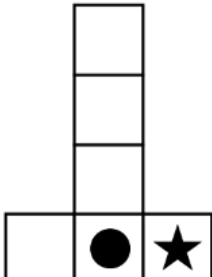
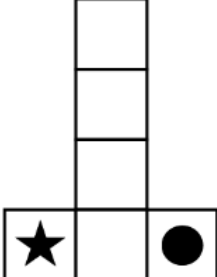
You have 5 minutes to complete Part B of the review test.

### 3D Cube to Net

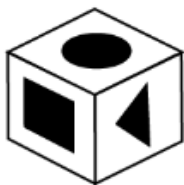
In the questions below, which of the nets can be used to create a 3D cube?

1. A.  B.  C.  D. 
2. A.  B.  C.  D. 

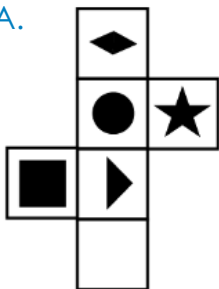
In the questions below, select the net that could be folded to create the cube.

3. 
- A.  B.  C.  D.  E. 

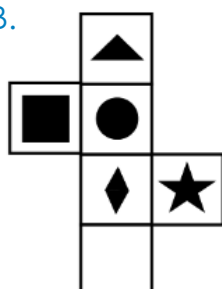
4.



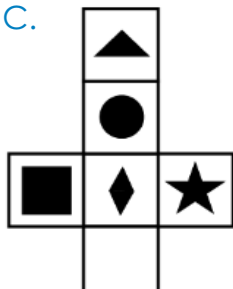
A.



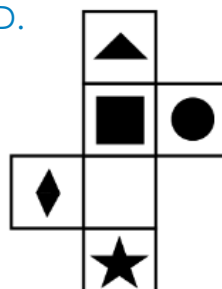
B.



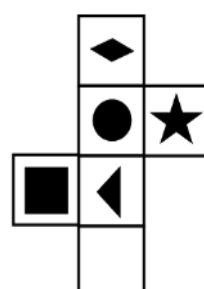
C.



D.

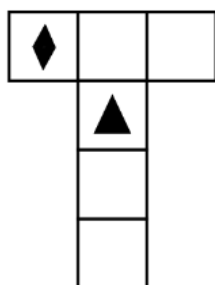


E.

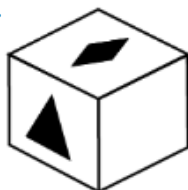


Select the cube that would unfold to create this net.

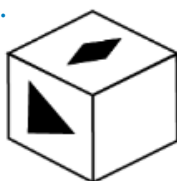
5.



A.



B.



C.



D.



E.





## SELF-REFLECTION

Take some time to reflect on your review test experience. Although they may sometimes feel stressful, exams can also be valuable learning opportunities.

### Your preparation

How confident did you feel going into the exam?



### Your performance

Did you have enough time to answer all the questions in the exam?

☐  
yes☐  
no

#### Which topic were you most confident answering?

VR Word Connections

Special Numbers

Comprehension

Adjectives

3D Cube to Net

#### Which topic would you like more practice on?

VR Word Connections

Special Numbers

Comprehension

Adjectives

3D Cube to Net

### What might you do differently next time?

In preparation for your next exam, write down one thing you will keep doing and one thing you will change for next time.

Keep	Change
<div></div>	<div></div>



## REVIEW TEST 4 PART A

You have 20 minutes to complete Part A of the review test.

### VR Closest and Opposite Meaning

1. Which word is a synonym of the word **accurate**?

- A. acute      B. similar      C. correct      D. vague      E. wrong

2. Which word is an antonym of the word **fear**?

- A. envious      B. dubious      C. confident      D. scared      E. courage

3. Find the **two** words, one from each group, that are most **similar** in meaning. Circle the **two** words from the options below.

(frog leap pad)      (jump sit run)

frog	jump
leap	sit
pad	run

4. Find the **two** words, one from each group, that are most **similar** in meaning. Circle the **two** words from the options below.

(exit exist extreme)      (entrance leave opening)

exit	entrance
exist	leave
extreme	opening

5. Find the **two** words, one from each group, that are most **opposite** in meaning. Circle the **two** words from the options below.

(except accept accent)      (take include reject)

except	take
accept	include
accent	reject



## Factors & Multiples

6. Which of the following numbers is the next multiple of 6?

**42, 48, 54, 60, 66, 72, ?**

A. 76                      B. 78                      C. 80                      D. 82                      E. 86

7. **12 and 24 are factors of 24.**

Circle **one** number below that is also a factor of 24.

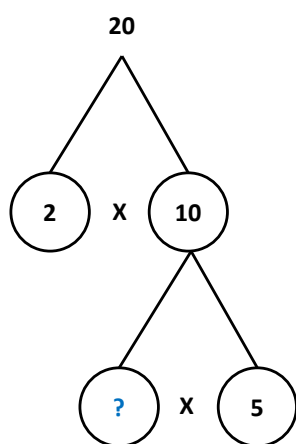
A. 1                      B. 5                      C. 7                      D. 9                      E. 11

8. **12 and 3 are factors of 36.**

Circle **one** number below that is also a factor of 36.

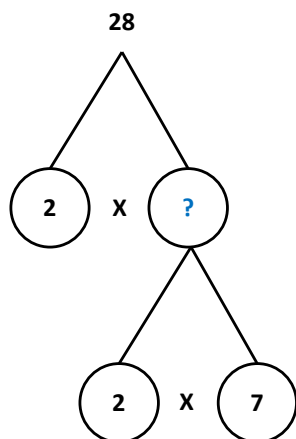
A. 9                      B. 10                      C. 11                      D. 14                      E. 16

9. **Circle the number that would complete the gap on the factor tree.**



A. 5                      B. 4                      C. 2                      D. 20                      E. 10

10. **Circle the number that would complete the gap on the factor tree.**



A. 32                      B. 14                      C. 16                      D. 8                      E. 21

## Verbs

In the questions below, choose the **verb** from each sentence.

11. The rabbit hopped away quickly.

- A. The      B. rabbit      C. hopped      D. away      E. quickly

12. Rishi revised every night for her maths test.

- A. revised      B. every      C. night      D. her      E. test

13. Martin travelled two hours on the train to work every day.

- A. travelled      B. two      C. hours      D. train      E. work

In the questions below, choose the correct **verb** to complete the sentence.

14. Sophia \_\_\_\_\_ her teeth every morning before school.

- A. cleared      B. cleans      C. clean      D. cleaner      E. cleanse

15. The man \_\_\_\_\_ all night to get the project finished.

- A. works      B. worker      C. worked      D. work      E. walk

16. I \_\_\_\_\_ five pieces of fruit every day.

- A. eaten      B. eat      C. eatery      D. eats      E. eating

17. I \_\_\_\_\_ over the fence when I was running yesterday.

- A. jumps      B. jumper      C. jumped      D. jumping      E. jump

In the questions below, choose the **modal verb** from each sentence.

18. I should go and visit Grandma.

- A. I      B. should      C. go      D. visit      E. Grandma

19. They may go to the beach at the weekend.

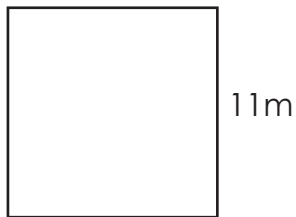
- A. may      B. go      C. the      D. beach      E. weekend

20. I must go for a run before work.

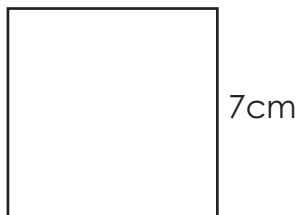
- A. I      B. must      C. go      D. run      E. before

## Perimeter & Area

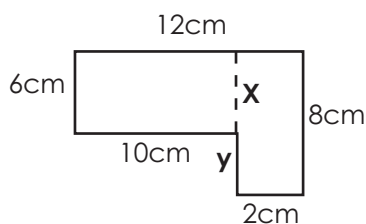
21. This shape is a square. What is its perimeter?



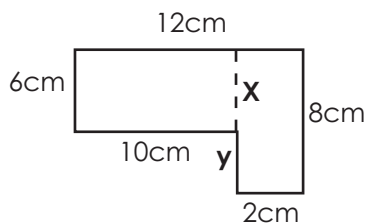
- A. 44m      B. 121cm      C. 44cm      D. 121m      E. 22m
22. What is the area of this square?



- A.  $14\text{cm}^2$       B.  $21\text{cm}^2$       C.  $28\text{cm}^2$       D.  $49\text{cm}^2$       E.  $35\text{cm}^2$
23. Calculate the area of the shape below.



- A.  $60\text{cm}^2$       B.  $38\text{cm}^2$       C.  $16\text{cm}^2$       D.  $76\text{cm}^2$       E.  $46\text{cm}^2$
24. A rectangle has a length of 6cm and a width of 3cm. What is its perimeter?
- A. 18cm      B. 9cm      C. 10cm      D. 12cm      E. 16cm
25. What is the value of  $y$  in the shape below?



- A. 6cm      B. 2cm      C. 8cm      D. 3cm      E. 4cm




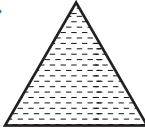

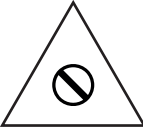
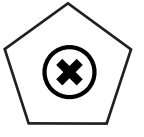

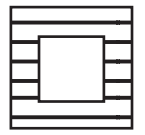






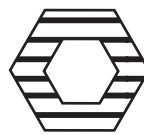


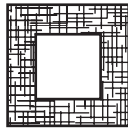



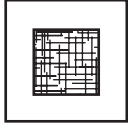



## REVIEW TEST 4 PART B

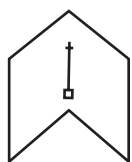
You have 5 minutes to complete Part B of the review test.

### NVR Analogies

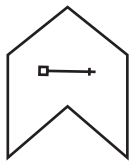
In the questions below, choose the figure that completes the second pair in the same way as the first pair.

1.  is to  as  is to
- A.  B.  C.  D.  E. 
2.  is to  as  is to
- A.  B.  C.  D.  E. 
3.  is to  as  is to
- A.  B.  C.  D.  E. 

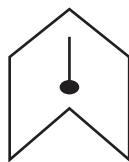
4.



is to



as

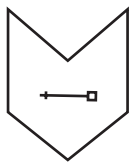


is to

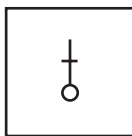
A.



B.



C.




D.



E.



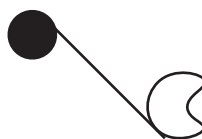
5.



is to



as



is to

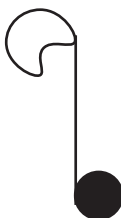
A.



B.



C.



D.



E.





## SELF-REFLECTION

Take some time to reflect on your review test experience. Although they may sometimes feel stressful, exams can also be valuable learning opportunities.

### Your preparation

How confident did you feel going into the exam?



### Your performance

Did you have enough time to answer all the questions in the exam?

☐  
yes☐  
no

#### **Which topic were you most confident answering?**

VR Closest & Opposite Meaning

Factors & Multiples

Verbs

Perimeter & Area

NVR Analogies


#### **Which topic would you like more practice on?**

VR Closest & Opposite Meaning

Factors & Multiples

Verbs

Perimeter & Area

NVR Analogies


### What might you do differently next time?

In preparation for your next exam, write down one thing you will keep doing and one thing you will change for next time.

Keep	Change



## REVIEW TEST 5 PART A

You have 20 minutes to complete Part A of the review test.

### VR Letter Series

A B C D E F G H I J K L M N O P Q R S T U V W X Y Z

1. What is the rule for this set of letters? Use the alphabet line above to help you.

**WV UT SR QP**

- A. The pairs of letters skip one letter forwards between each pair.
- B. The pairs of letters skip one letter backwards between each pair.
- C. The pairs of letters run backwards in alphabetical order.
- D. The pairs of letters run forwards in alphabetical order.

2. In the questions below, there are **four** pairs of letters. Find the pair of letters that continues the series in the most sensible way.

The rule for this question is that the pairs go in alphabetical order backwards but skip **one** letter in between.

**PO ML JI GF**

- A. CD      B. DC      C. ED      D. CB      E. CD

3. The rule for this question is that the pairs go in alphabetical order forwards but skip **two** letters in between.

**DE HI LM PQ**

- A. RS      B. UT      C. ST      D. TU      E. UV

4. Find the pair of the letters that continues the series in the most sensible way. Choose **one** pair from the answers below.

**CJ EL GN IP KR**

- A. MN      B. LM      C. LS      D. MS      E. MT

5. Find the pair of the letters that continues the series in the most sensible way. Choose **one** pair from the answers below.

**BC EF HI KL NO**

A. PQ

B. RS

C. QR

D. OP

E. MN

### Place Value

6. What is the value of the underlined digit?

**5,673**

A. 7

B. 17

C. 70

D. 700

E. 7,000

7. What is the value of the underlined digit?

**2,160**

A. 2

B. 12

C. 20

D. 200

E. 2,000

8. What is the value of the underlined digit?

**1,982**

A. 9

B. 19

C. 90

D. 900

E. 9,000

9. What is the value of the underlined digit?

**8,346**

A. 6

B. 16

C. 60

D. 600

E. 6,000

10. What is the value of the underlined digit?

**3,017**

A. 1

B. 11

C. 10

D. 100

E. 1,000

11. Round the number below to the nearest 1,000.

**1,345**

A. 100

B. 1,000

C. 1,500

D. 2,000

E. 1,300

12. Round the number below to the nearest 1,000.

**4,698**

A. 4,000

B. 4,500

C. 4,600

D. 5,000

E. 6,000



13. Round the number below to the nearest 1,000.

**3,165**

A. 3,000

B. 3,100

C. 3,500

D. 4,000

E. 4,500

14. Which set of numbers below is ordered from smallest to largest?

A. 1,003, 1,030, 1,004, 1,040, 1,031

B. 1,003, 1,004, 1,030, 1,031, 1,040

C. 1,030, 1,040, 1,003, 1,031, 1,004

D. 1,031, 1,003, 1,030, 1,004, 1,040

E. 1,004, 1,040, 1,030, 1,031, 1,003

15. Which set of numbers below is ordered from smallest to largest?

A. 13,657, 13,659, 13,560, 13,675, 13,660

B. 13,560, 13,657, 13,659, 13,660, 13,675

C. 13,675, 13,660, 13,659, 13,657, 13,560

D. 13,660, 13,657, 13,659, 13,675, 13,560

E. 13,659, 13,657, 13,560, 13,660, 13,675

### Alliteration & Onomatopoeia

16. Does this sentence contain alliteration?

**Barbara bought a big bronze box of beautiful books.**

A. True

B. False

17. Does this sentence contain alliteration?

**The leaves in the trees rustled.**

A. True

B. False

18. Does this sentence contain alliteration?

**Hamza hurried home to watch the final on TV.**

A. True

B. False

19. Does this sentence contain onomatopoeia?

**The snake hissed at the intruder.**

- A. True                      B. False

20. Does this sentence contain onomatopoeia?

**The waves crashed against the side of the rocks.**

- A. True                      B. False

### VR Insert a Letter

In the questions below, find **one** letter that will complete the word in front of the brackets and begin the word after the brackets. The **same letter** must fit into both sets of brackets.

21. MIN [ ] OIL    CUR [ ] ANGLE

- A. D                      B. T                      C. E                      D. F                      E. B

22. SPA [ ] USH    BAL [ ] EAL

- A. D                      B. H                      C. R                      D. M                      E. P

23. HOO [ ] ROWN    GRI [ ] OLL

- A. T                      B. F                      C. L                      D. D                      E. B

24. MUS [ ] URN    BEE [ ] ANK

- A. T                      B. L                      C. B                      D. R                      E. P

25. SLA [ ] OWER    HOO [ ] ARK

- A. D                      B. L                      C. T                      D. M                      E. P




## REVIEW TEST 5 PART B

You have 5 minutes to complete Part B of the review test.

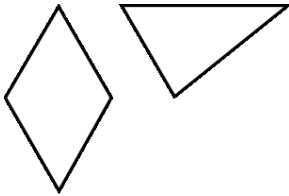
### 2D Composite Shapes

In the questions below, which two shapes could be used to create this image?

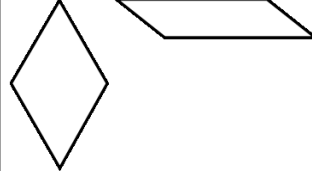
1.



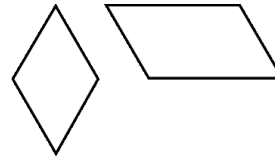
A.



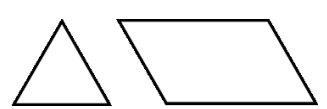
B.



C.



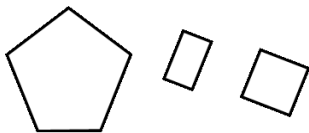
D.



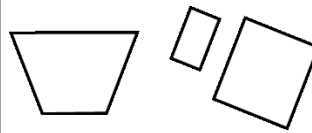
2.



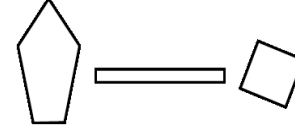
A.



B.



C.



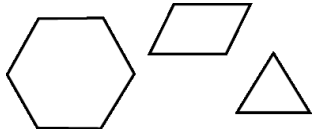
D.



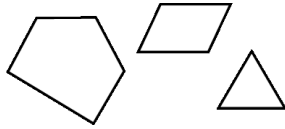
3.



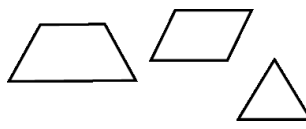
A.



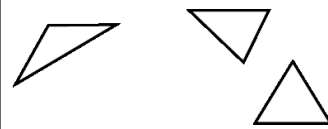
B.



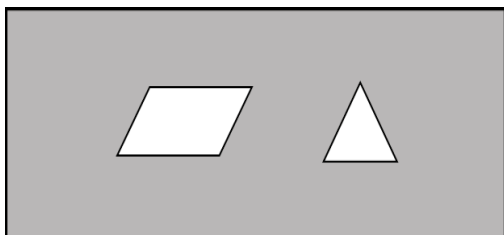
C.



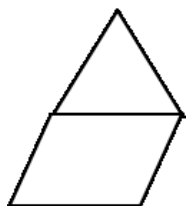
D.



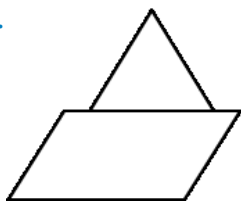
4.



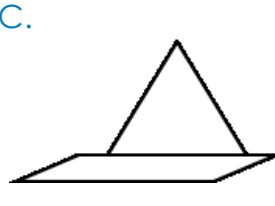
A.



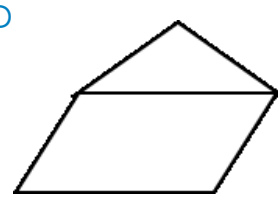
B.



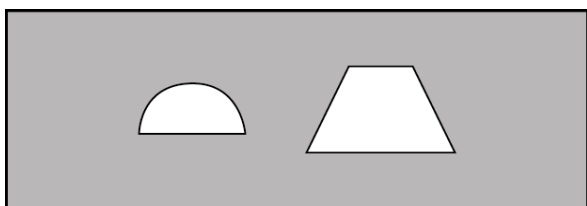
C.



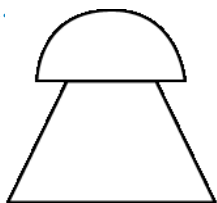
D.



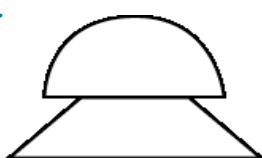
5.




A.



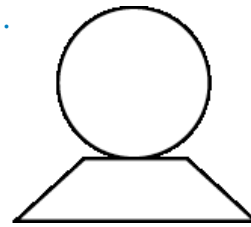
B.



C.



D.





## SELF-REFLECTION

Take some time to reflect on your review test experience. Although they may sometimes feel stressful, exams can also be valuable learning opportunities.

### Your preparation

How confident did you feel going into the exam?



### Your performance

Did you have enough time to answer all the questions in the exam?

☐  
yes☐  
no

#### **Which topic were you most confident answering?**

VR Letter Series

Place Value

Alliteration & Onomatopoeia

VR Insert a Letter

2D Composite Shapes


#### **Which topic would you like more practice on?**

VR Letter Series

Place Value

Alliteration & Onomatopoeia

VR Insert a Letter

2D Composite Shapes


### What might you do differently next time?

In preparation for your next exam, write down one thing you will keep doing and one thing you will change for next time.

Keep	Change



## REVIEW TEST 6 PART A

You have 20 minutes to complete Part A of the review test.

### VR Reading for Information

1. During a day in the office, 36 teabags are used. There are 9 members of staff in the office and they all drank the same amount of tea.

**Which calculation is needed to work out how many cups of tea each person drank?**

- A.  $36 + 9$       B.  $36 \times 9$       C.  $9 \div 36$       D.  $36 - 9$       E.  $36 \div 9$

2. Jason has two rabbits and one parrot. Aman has one hamster. Adel has 4 stick insects and three rabbits, and Nora has no rabbits and a dog.

**Which calculation is needed to work out how many rabbits they have altogether?**

- A.  $4 \div 2$       B.  $2 + 3$       C.  $4 + 3 + 0$       D.  $2 \times 3$       E.  $2 + 1$

3. Reeva is younger than Esther but older than Hassan. Omer is older than Hassan but younger than Reeva.

**Using the information above, decide whether the following statements are true or false.**

	True	False
Esther is the oldest.		
Omer is younger than Reeva.		
Reeva is the youngest.		

4. Kyra has £6. Sami has £10 more than Kyra but £3 less than Cora. Matilda has £2 more than Kyra.

**Using the information above, decide whether the following statements are true or false.**

	True	False
Sami has more money than Kyra.		
Matilda has the least money.		
Cora has the most money.		

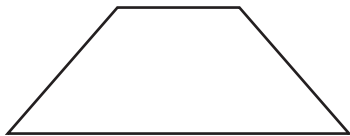
5. Leane ran 5km in 20 minutes, which was 20 seconds faster than Ishan. Lily ran 5km in 26 minutes, which was four minutes slower than Liam. Veer finished 30 seconds before Liam.

Using the information above, complete the table below.

	True	False	Not Certain
Lily finished last.			
Ishan finished in 18 minutes and 40 seconds.			
The 5km trail was muddy.			
Veer passed Lily in the last stretch of the race.			

## Symmetry

6. How many lines of symmetry does the shape below have?



- A. 0      B. 1      C. 2      D. 3      E. 4

7. How many lines of symmetry does the shape below have?



- A. 2      B. 3      C. 4      D. 5      E. 6

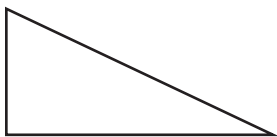
8. Which of the options below show the completed image if the dotted line is a line of symmetry?



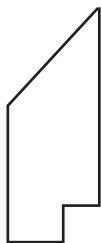
- A.      B.      C.      D.      E.

9. Select the shape that has reflective symmetry.


A.



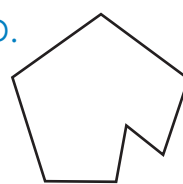
B.



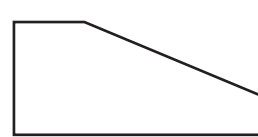
C.



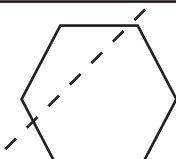


D.



E.



10. The diagram shows a line of symmetry for the shape. True or false?

	True	False
1. 		
2. 		
3. 		

### Vocabulary in Context

In the questions below, read the sentence and use the context clues to determine the meaning of the word in bold.

11. The team are running very low on players. They must **acquire** new ones.

A. learn a new skill

B. buy or obtain

C. give to someone

D. take from someone



12. My heart started to beat faster, as I was trapped in the lift in such a **confined** space.
- A. unable to leave
  - B. to take ill suddenly
  - C. to hold against someone's will
  - D. small or restricted
13. They know I don't like that. I was hurt but they **deliberately** set out to upset me.
- A. done with intent
  - B. done with conscience
  - C. done with humour
  - D. done with verbal communication
14. The cottages in the small rural village were so **quaint**; like something out of an old movie!
- A. old and quirky
  - B. modern and colourful
  - C. cosy and small
  - D. cute and old-fashioned
15. I couldn't resist the chocolate any longer and gave in to **temptation**.
- A. an act of kindness
  - B. strong feeling of support
  - C. desire to do something
  - D. intention to be kind

## Writing Features

16. Which of these is **not** a typical feature of a newspaper?

- A. headline
- B. name of the newspaper
- C. pictures with captions
- D. informal language
- E. direct and reported speech

17. Look at the newspaper headline below. What literary technique does it use?

**Blind dog becoming very pup-ular on social media!**

- A. pun
- B. alliteration
- C. rhetorical question
- D. hyperbole
- E. metaphor

18. Look at the letter below. What is the purpose of this letter?



- A. inform
- B. persuade
- C. invite
- D. complain
- E. request

19. An informative text informs the reader about a topic by providing accurate facts. Which of the statements below is **not** a fact?

- A. South America is the fourth-largest continent in the world.
- B. Machu Picchu is the most visited tourist destination in Peru.
- C. With only 15mm of rain a year, the Atacama Desert in Chile is one of the driest places on Earth.
- D. Rio de Janeiro is a great city to visit during the carnival.
- E. The capital city of Brazil is Brasilia.

**20.** Which of the following would **most likely** be a form of persuasive writing?

A. Postcard to a friend

B. Non-fiction story

C. Playscript

D. Advert

E. Newspaper article




## REVIEW TEST 6 PART B

You have 5 minutes to complete Part B of the review test.

### Matrices

In the questions below, choose the figure that should fill the empty square.

1.



A.



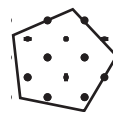
B.



C.




D.



E.



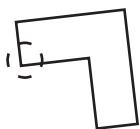
2.



A.




B.




C.




D.



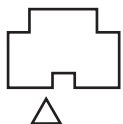
E.



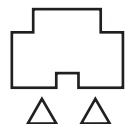
3.



A.



B.



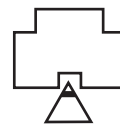
C.




D.



E.



4.



A.



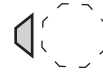
B.



C.




D.



E.



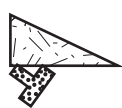
5.



A.



B.



C.



D.



E.





## SELF-REFLECTION

Take some time to reflect on your review test experience. Although they may sometimes feel stressful, exams can also be valuable learning opportunities.

### Your preparation

How confident did you feel going into the exam?



### Your performance

Did you have enough time to answer all the questions in the exam?

☐  
yes☐  
no

#### **Which topic were you most confident answering?**

VR Reading for Information

Symmetry

Vocabulary in Context

Writing Features

NVR Matrices


#### **Which topic would you like more practice on?**

VR Reading for Information

Symmetry

Vocabulary in Context

Writing Features

NVR Matrices


### What might you do differently next time?

In preparation for your next exam, write down one thing you will keep doing and one thing you will change for next time.

Keep	Change



## REVIEW TEST 7 PART A

You have 20 minutes to complete Part A of the review test.

### VR Jumbled Sentences

In the questions below, the words are a jumbled sentence. Rearrange the words to form a sentence and choose from the options below.

1. **barista coffee four of cups the made**

- A. The coffee made four cups of barista.
- B. Coffee cups made of the four barista.
- C. The barista made four cups of coffee.
- D. Of the four coffee cups made barista.

2. **the classroom is teacher the in**

- A. The teacher is in the classroom.
- B. Teacher the is in the classroom.
- C. In the classroom is teacher the.
- D. Is in the classroom the teacher.

3. The words below are a jumbled sentence, with **one** extra word. Unscramble the sentence to identify the superfluous word.

**the ball chased dog all tickled afternoon the**

- A. ball      B. chased      C. dog      D. tickled      E. the

4. The words below are a jumbled sentence, with **one** extra word. Unscramble the sentence to identify the superfluous word.

**take we can the present with to party the**

- A. take      B. we      C. with      D. the      E. present

5. The words below are a jumbled sentence, with **one** extra word. Unscramble the sentence to identify the superfluous word.

**flavour teaspoon of produce honey in bees their lifetime a**

- A. flavour      B. teaspoon      C. produce      D. in      E. their

### Fractions

In the questions below, calculate the fractions of the amounts.

6.  $\frac{1}{4}$  of 8

- A. 4      B. 2      C. 3      D. 6      E. 8

7.  $\frac{1}{2}$  of 22

- A. 20      B. 10      C. 11      D. 8      E. 9

8.  $\frac{2}{3}$  of 27

- A. 9      B. 12      C. 16      D. 18      E. 23

9.  $\frac{1}{2}$  of 16

- A. 7      B. 8      C. 10      D. 12      E. 14

10.  $\frac{3}{4}$  of 48

- A. 12      B. 24      C. 28      D. 34      E. 36

In the questions below, choose the fraction with the highest value.

11.  $\frac{1}{3}$        $\frac{3}{4}$        $\frac{5}{12}$        $\frac{1}{2}$        $\frac{5}{6}$

- A.  $\frac{1}{3}$       B.  $\frac{3}{4}$       C.  $\frac{5}{12}$       D.  $\frac{1}{2}$       E.  $\frac{5}{6}$

12.  $\frac{1}{15}$        $\frac{2}{3}$        $\frac{4}{5}$        $\frac{1}{3}$        $\frac{7}{15}$

- A.  $\frac{1}{15}$       B.  $\frac{2}{3}$       C.  $\frac{4}{5}$       D.  $\frac{1}{3}$       E.  $\frac{7}{15}$

13.  $\frac{3}{4}$        $\frac{1}{6}$        $\frac{7}{12}$        $\frac{2}{3}$        $\frac{1}{2}$

- A.  $\frac{3}{4}$       B.  $\frac{1}{6}$       C.  $\frac{7}{12}$       D.  $\frac{2}{3}$       E.  $\frac{1}{2}$

In the questions below, choose the correct answer for the calculation.

14.  $\frac{4}{6} + \frac{9}{12} =$

- A.  $\frac{13}{18}$       B.  $1\frac{5}{12}$       C.  $\frac{15}{12}$       D.  $\frac{13}{12}$       E.  $\frac{16}{12}$



15.  $\frac{3}{5} - \frac{1}{3} =$

A.  $\frac{4}{8}$

B.  $\frac{4}{5}$

C.  $\frac{2}{2}$

D.  $\frac{2}{5}$

E.  $\frac{4}{15}$

### Direct & Reported Speech

In the questions below, choose the option that correctly changes the sentence **from direct to reported speech**.

16. **"I bid you farewell, friends!" shouted the alien from his spaceship.**

A. The alien shouted goodbye to his friends.

B. From his spaceship, the alien bid farewell to his friends.

C. "The alien bid farewell to his friends from his spaceship."

D. The alien left on his spaceship and shouted farewell to his friends.

17. **"We should all go and see a movie," announced Fred.**

A. "Fred wants to go and see a movie."

B. Fred begs his friends to go to the movies with him.

C. Fred announced that they should all go and see a movie.

D. Fred announces that he loves going to the movies.

18. **"I feel disappointed to have missed out on the gold medal," sighed the athlete.**

A. The athlete felt disappointed to have missed out on the gold medal.

B. The athlete should have done better.

C. "The athlete wanted to win a gold medal."

D. The athlete let out a long sigh over not winning a gold medal.

In the questions below, choose the option that correctly changes the sentence **from reported to direct speech**.

19. **The boy shouted that he would like an ice cream.**

A. I want a chocolate ice cream, shouted the boy.

B. "The ice cream van is here!" exclaimed the boy.

C. "Can I have an ice cream, please?"

D. "I would like an ice cream!" shouted the boy.

**20. As she was taking the photograph, the girl asked her dad to say cheese.**

- A. The girl told her dad to say cheese when she was taking photographs.
- B. "Say cheese, Dad," asked the girl, as she was taking the photograph.
- C. "Say cheddar, Dad!" shouted the girl.
- D. The girl asked her dad if she could take photographs of cheese.

### Problem Solving

**21.** Estelle and Sam are doing a sponsored bake sale for charity. Estelle raised £52 for charity, and Sam raised four times as much. How much money did Sam raise?

- A. £200      B. £104      C. £208      D. £238      E. £198

**22.** Indie lives four times further away from Newcastle than Mira, but Mira lives five times further away than Alisha. If Indie lives 32 miles from Newcastle, how far away does Mira live?

- A. 6 miles      B. 8 miles      C. 12 miles      D. 16 miles      E. 24 miles

**23.** Gabrielle bought 5 books, each costing £3.30. She paid with £20.00. How much change did she get?

- A. £3.50      B. £6.80      C. £4.20      D. £16.50      E. £4.80

**24.** Ruben and Kofi are doing a sponsored 12-mile run for charity. Ruben can run at 6 miles per hour. How long will he take to finish the sponsored run?

- A. 1 hour 2 minutes      B. 1 hour 12 minutes      C. 70 minutes      D. 2 hours      E. 78 minutes

**25.** Omari arrived at work at 8:15am. Jude had set off at 8:05am and arrived at work 20 minutes after Omari. How long did it take him to get there?

- A. 25 minutes      B. 30 minutes      C. 20 minutes      D. 35 minutes      E. 40 minutes



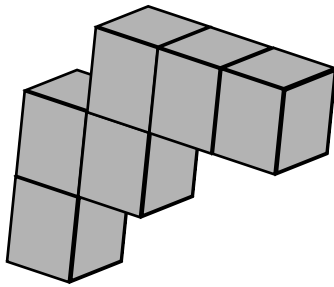
## REVIEW TEST 7 PART B

You have 5 minutes to complete Part B of the review test.

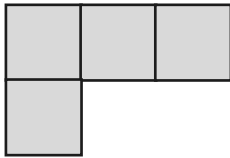
### 3D Plan Views

In the questions below, select the option that is the plan view of the 3D shape.

1.



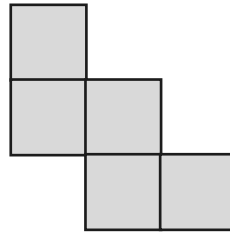
A.



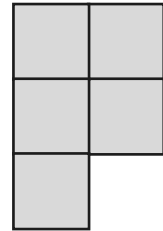
B.



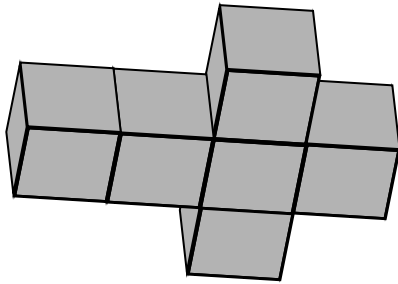
C.



D.



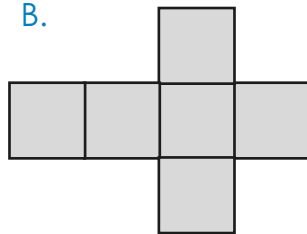
2.



A.



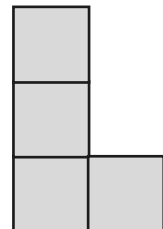
B.



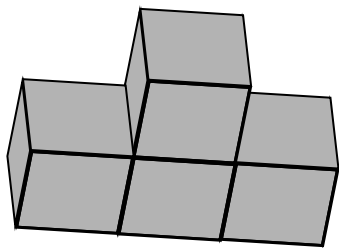
C.



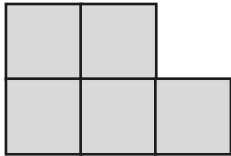
D.



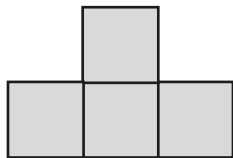
3.



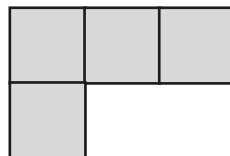
A.



B.



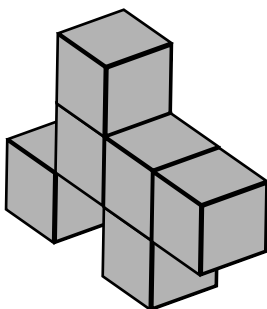
C.



D.



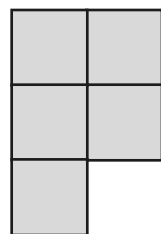
4.



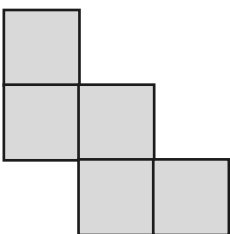
A.



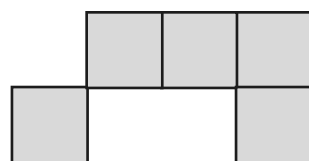
B.



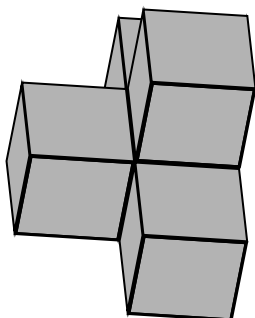
C.



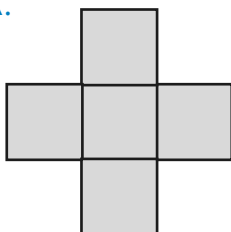
D.



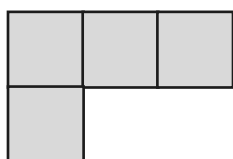
5.



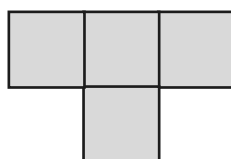
A.



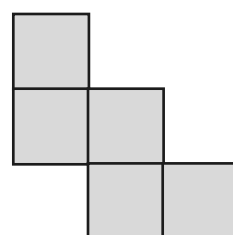
B.



C.



D.





## SELF-REFLECTION

Take some time to reflect on your review test experience. Although they may sometimes feel stressful, exams can also be valuable learning opportunities.

### Your preparation

How confident did you feel going into the exam?



### Your performance

Did you have enough time to answer all the questions in the exam?

☐  
yes☐  
no

#### **Which topic were you most confident answering?**

VR Jumbled Sentences

Fractions

Comprehension

Problem Solving

3D Plan Views


#### **Which topic would you like more practice on?**

VR Jumbled Sentences

Fractions

Comprehension

Problem Solving

3D Plan Views


### What might you do differently next time?

In preparation for your next exam, write down one thing you will keep doing and one thing you will change for next time.

Keep	Change



## REVIEW TEST 8 PART A

You have 20 minutes to complete Part A of the review test.

### VR Anagrams

Rearrange the **underlined** letters in the sentences to form a word. Use the definition to help you.

1. The small alcf bounced across the field.

Definition: a baby cow.

- A. laf      B. calf      C. claf      D. flac

Rearrange the **underlined** letters in the sentence to form a word. The sentence must make sense.

2. I walk to olcsoh every day with my friends.

- A. cool      B. school      C. lochs      D. cools

3. The new football plsraye are a great addition to the team.

- A. players      A. sparely      A. parsley      A. replays

The **underlined** word has had **one** letter removed and the remaining letters mixed up. Unscramble the letters and work out which letter is missing.

4. When I go to the shop, I need to buy bade and milk.

- A. v      B. k      C. e      D. c      E. r

5. My lessons at school today are maths, English, science and ishroy.

- A. b      B. c      C. h      D. t      E. p

## Decimals

In the questions below, choose the set of decimals that is ordered from smallest to largest.

6.    A. 0.001, 0.06, 0.03, 0.5, 0.4  
      B. 0.5, 0.03, 0.001, 0.06, 0.4  
      C. 0.001, 0.03, 0.06, 0.4, 0.5  
      D. 0.06, 0.001, 0.4, 0.5, 0.03
7.    A. 1.089, 1.258, 1.26, 1.62, 1.76  
      B. 1.089, 1.76, 1.26, 1.62, 1.258  
      C. 1.258, 1.62, 1.26, 1.089, 1.76  
      D. 1.76, 1.26, 1.258, 1.089, 1.62,
8.    A. 0.003, 0.63, 0.12, 0.03, 0.6  
      B. 0.03, 0.12, 0.003, 0.6, 0.63  
      C. 0.03, 0.003, 0.63, 0.12, 0.6  
      D. 0.003, 0.03, 0.12, 0.6, 0.63

In the questions below, round each number to the nearest whole number.

9.    **0.4**  
      A. 0                      B. 1.5                      C. 2                      D. 4                      E. 0.5
10. **18.8**  
      A. 18                      B. 20                      C. 18.5                      D. 19                      E. 15

Round the number below to one decimal place.

11. **12.6345**  
      A. 12.6                      B. 12                      C. 12.63                      D. 12.7                      E. 12.5

In the questions below, choose the correct answer to the calculation.

12.  $6.7 \times 10 =$

- A. 0.67                      B. 670                      C. 6,700                      D. 607                      E. 67

13.  $22.02 \times 100 =$

- A. 222                      B. 202                      C. 2,202                      D. 2.020                      E. 22

14.  $34 \div 10 =$

- A. 0.34                      B. 0.034                      C. 340                      D. 3.4                      E. 0.340

15.  $127 \div 100 =$

- A. 0.127                      B. 1.27                      C. 12.7                      D. 0.0127                      E. 1270

## Comprehension

Read the extract from *Alice's Adventures in Wonderland* below and answer the questions that follow.

### From *Alice's Adventures in Wonderland* by Lewis Carroll

It was the White Rabbit, trotting slowly back again, and looking anxiously about as it went, as if it had lost something; and she heard it muttering to itself 'The Duchess! The Duchess! Oh my dear paws! Oh my fur and whiskers! She'll get me executed, as sure as ferrets are ferrets! Where can I have dropped them, I wonder?' Alice guessed in a moment that it was looking for the fan and the pair of white kid gloves, and she very good-naturedly began hunting about for them, but they were nowhere to be seen – everything seemed to have changed since her swim in the pool, and the great hall, with the glass table and the little door, had vanished completely.

Very soon the Rabbit noticed Alice, as she went hunting about, and called out to her in an angry tone, 'Why, Mary Ann, what are you doing out here? Run home this moment, and fetch me a pair of gloves and a fan! Quick, now!' And Alice was so much frightened that she ran off at once in the direction it pointed to, without trying to explain the mistake it had made.

'He took me for his housemaid,' she said to herself as she ran. 'How surprised he'll be when he finds out who I am! But I'd better take him his fan and gloves—that is, if I can find them.' As she said this, she came upon a neat little house, on the door of which was a bright brass plate with the name 'W. RABBIT' engraved upon it. She went in without knocking, and hurried upstairs, in great fear lest she should meet the real Mary Ann, and be turned out of the house before she had found the fan and gloves.



16. What does Alice assume the White Rabbit is looking for? Circle **two** answers.

- A. The Duchess
- B. the ferret
- C. the fan
- D. the glass table
- E. the pair of white kid gloves

17. White Rabbit confuses Alice for Mary Ann. What is Mary Ann's occupation?

- A. Waitress
- B. Housemaid
- C. Teacher
- D. Painter
- E. Swimmer

18. **Run** home this moment, and fetch me a pair of gloves and a fan!

In the sentence above, what type of word is the word in bold?

- A. Verb
- B. Common Noun
- C. Adjective
- D. Preposition
- E. Conjunction

19. Choose the best definition for the word '**engraved**'.

- A. To make an impression on someone's mind.
- B. To place or fix into position ready for use.
- C. To enclose or integrate firmly.
- D. Cut or carve a text or design on the surface of a hard object.
- E. Emphasise that you will never forget something.

20. How did Alice know which house belonged to White Rabbit?

- A. White Rabbit tells Alice it's his house.
- B. There's a signpost.
- C. The housemaid tells Alice.
- D. The street is named after him.
- E. His name was on the house.

### VR Compound Words

21. Which of the following is a compound word?

- A. afternoon    B. runflower    C. snowbow    D. legball

22. Which of the following is a compound word?

- A. handchair    B. lockhole    C. fogfall    D. armchair

In the questions below, find **two** words, one from each group, that together make **one** correctly spelt word, without changing the order of the letters. The word from the first group always comes first. Choose **both** words from the options below.

23. (cat sun lace) (crate back flower)

- A. cat crate    B. sun back    C. lace crate    D. sun flower    E. lace back

24. (shark jelly ice) (fish water party)

- A. shark fish    B. jelly water    C. ice fish    D. shark party    E. jelly fish

25. (drink straw juice) (top berry blue)

- A. straw berry    B. juice top    C. drink blue    D. juice berry    E. straw blue




## REVIEW TEST 8 PART B

You have 5 minutes to complete Part B of the review test.


### NVR Codes

In the questions below, choose the missing code.


1.



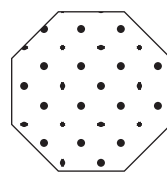
S




D



D



S



?

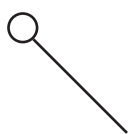
A. A

B. D

C. S

D. Q

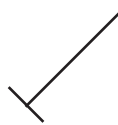
2.



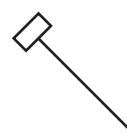
W



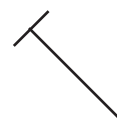
G



E



W



?

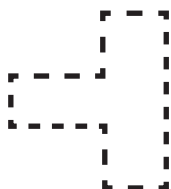
A. W

B. E

C. Q

D. G

3.



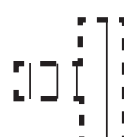
ND



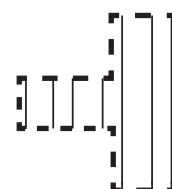
NO



UO



UO



?

A. UO

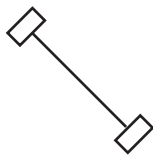
B. UD

C. NO

D. ND

E. DU

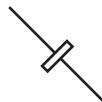
4.




VK



XB



XK



VN



?

A. VB

B. XB

C. XN

D. VK

E. NX

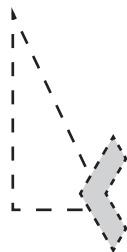
5.



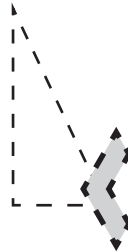
OQ



GZ



OZ



GZ



?

A. GQ

B. OQ

C. OZ

D. QG

E. GZ



## SELF-REFLECTION

Take some time to reflect on your review test experience. Although they may sometimes feel stressful, exams can also be valuable learning opportunities.

### Your preparation

How confident did you feel going into the exam?



### Your performance

Did you have enough time to answer all the questions in the exam?

☐  
yes☐  
no

#### **Which topic were you most confident answering?**

VR Anagrams

☐  
☐  
☐  
☐

Decimals

Direct & Reported Speech

NVR Codes

#### **Which topic would you like more practice on?**

VR Anagrams

☐  
☐  
☐  
☐

Decimals

Direct & Reported Speech

NVR Codes

### What might you do differently next time?

In preparation for your next exam, write down one thing you will keep doing and one thing you will change for next time.

Keep	Change



## REVIEW TEST 9 PART A

You have 20 minutes to complete Part A of the review test.

### VR Related Words

1. Identify the word that is the **odd one out**.

(cow, sheep, tractor, dog, horse)

A. cow      B. sheep      C. tractor      D. dog      E. horse

2. Identify the word that is the **odd one out**.

(calf, chick, lamb, pig, puppy)

A. calf      B. chick      C. lamb      D. pig      E. puppy

3. (run, swim, care, laugh, walk)

From the list above, the words, **run**, **swim** and **walk** are all related in some way. Select the answer that best describes the relationship between the **group of three words**.

- A. The words are homophones.  
B. The words are adjectives.  
C. The words are all school subjects.  
D. The words are verbs.

4. In the questions below, **three** of the **five** words listed below are related in some way. Find the **two** words that do not go with these three.

(football, painting, golf, cricket, reading)

A. football      B. painting      C. golf      D. cricket      E. reading

5. (begin, finish, race, stop, end)

A. begin      B. finish      C. race      D. stop      E. end

## Percentages

In the questions below, choose the equivalent percentage for the fractions and decimals.

6.  $\frac{9}{10}$  0.9

- A. 10%      B. 90%      C. 5%      D. 25%      E. 19%

7.  $\frac{4}{5}$  0.8

- A. 18%      B. 45%      C. 80%      D. 8%      E. 15%

8.  $\frac{1}{10}$  0.1

- A. 1%      B. 11%      C. 20%      D. 10%      E. 30%

9.  $\frac{1}{5}$  0.2

- A. 20%      B. 5%      C. 25%      D. 2%      E. 10%

10.  $\frac{1}{3}$  0.33

- A. 13%      B. 3%      C. 15%      D. 23%      E. 33%

In the questions below, choose the correct answer for the calculation.

11. 50% of 620 =

- A. 320      B. 410      C. 62      D. 280      E. 310

12. 20% of 450 =

- A. 90      B. 45      C. 80      D. 9      E. 75

13. 30% of 840 =

- A. 168      B. 252      C. 24      D. 250      E. 332

14. 75% of 60 =

- A. 18      B. 55      C. 45      D. 47      E. 12

15. 25% of 56 =

A. 11

B. 10

C. 8

D. 14

E. 12

## Tenses

Select the correct verb from the brackets to complete the sentence below.

16. After dinner last night, Sasha (helps, helped, healing) her mum with the dishes.

17. James (run, running, ran) quickly to catch the bus before it left.

18. The flowers are (bloom, blooms, blooming) in the garden as spring arrives.

19. The students are (work, works, working) hard on their science project.

20. The wind (blow, blows, blowing) the leaves across the field.

## VR Same Meaning

In each question below, there are two pairs of words. You must select a word from the options below that will go equally well with both pairs.

21. (faint blonde) (honest just)

A. bleached

B. pale

C. good

D. faded

E. fair

22. (spirit courage) (core middle)

A. centre

B. bravery

C. heart

D. obey

E. kernel

23. (reject refuse) (descend sink)

A. decline

B. lower

C. fall

D. slide

E. diminish

24. (brew concoction) (combine mix)

A. combination

B. stir

C. softness

D. blend

E. mixture

25. (sunny shiny) (keen quick)

A. bright

B. fine

C. brilliant

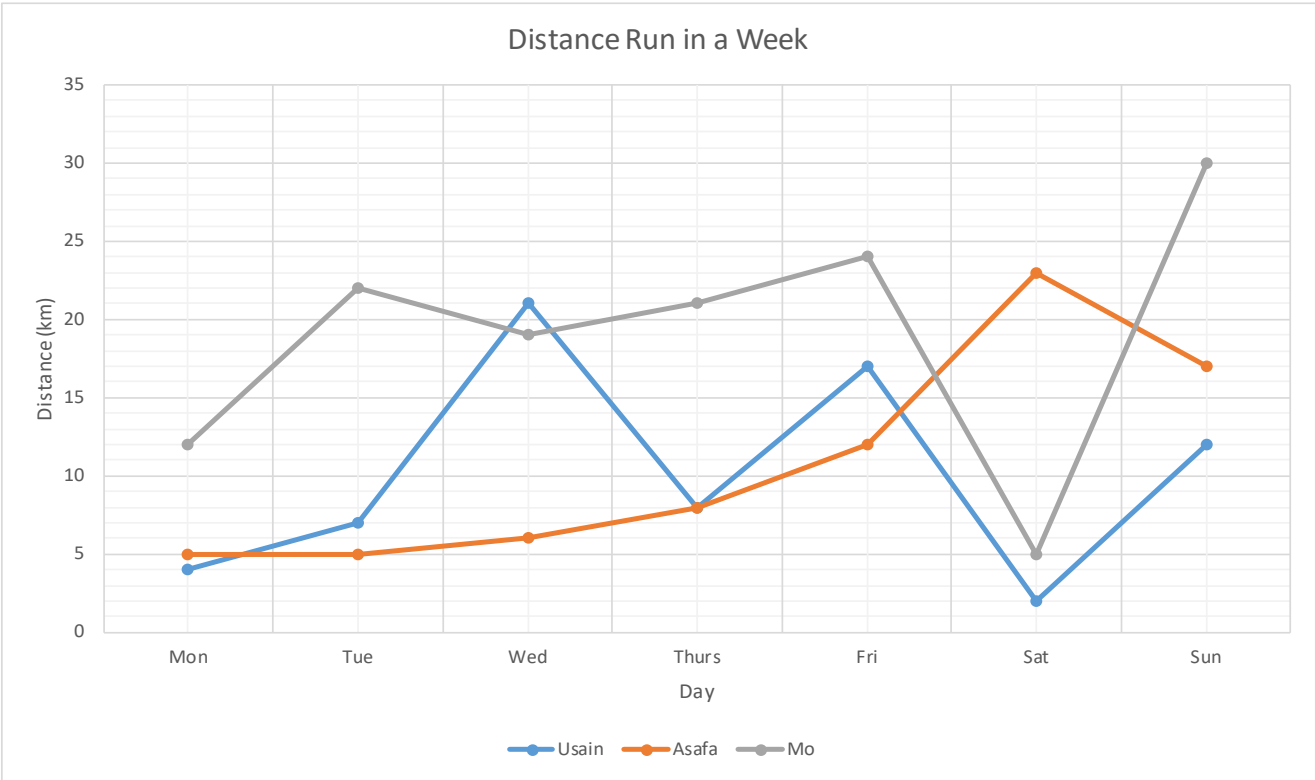
D. smart

E. sharp



Interpreting Data

Look at the line graph below and decide whether the statements are true or false.



		True	False
26.	Asafa ran the most km on Wednesday.		
27.	Mo ran the most km on Sunday.		
28.	Over the weekend Mo ran 35km.		
29.	On Tuesday Asafa ran 5 miles.		
30.	Mo ran more km than Usain and Asafa combined on Monday.		
31.	Asafa and Usain ran the same distance on Thursday.		
32.	The scale of the y axis is 10km.		
33.	The x axis is labelled in months.		
34.	The legend depicts distance run.		
35.	On 4 days Mo ran more than 20km.		

## VR Letter for Number

In the questions below, letters stand for numbers. Use the code to work out the answer to the calculation. Choose the correct letter as your answer.

36.  $A = 4$     $B = 8$     $C = 24$     $D = 3$     $E = 1$   
 **$C \div A - D = ?$**

- A. A                      B. B                      C. C                      D. D                      E. E

37.  $A = 28$     $B = 3$     $C = 4$     $D = 5$     $E = 10$   
 **$A \div C + B = ?$**

- A. A                      B. B                      C. C                      D. D                      E. E

38.  $A = 92$     $B = 6$     $C = 92$     $D = 15$     $E = 101$   
 **$C + D - B = ?$**

- A. A                      B. B                      C. C                      D. D                      E. E

39.  $A = 34$     $B = 17$     $C = 3$     $D = 13$     $E = 6$   
 **$B \times E \div C = ?$**

- A. A                      B. B                      C. C                      D. D                      E. E

40.  $A = 22$     $B = 6$     $C = 4$     $D = 1$     $E = 2$   
 **$A \div E - C - D = ?$**

- A. A                      B. B                      C. C                      D. D                      E. E




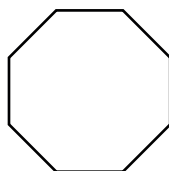

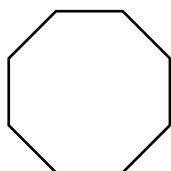
## REVIEW TEST 9 PART B

You have 5 minutes to complete Part B of the review test.

### NVR Series

In the questions below, choose the figure that completes the series in the best way.

1.

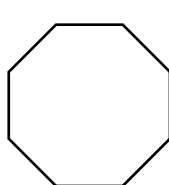


\_\_\_\_\_


A.



B.



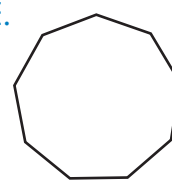
C.






D.




E.




2.




\_\_\_\_\_




A.




B.




C.



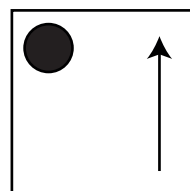
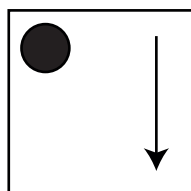
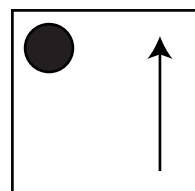
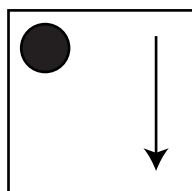
D.



E.

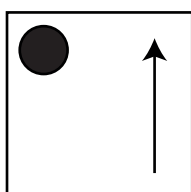


3.

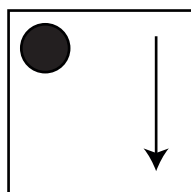


\_\_\_\_\_

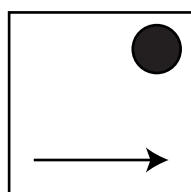
A.



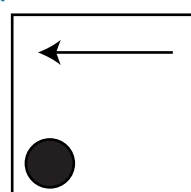
B.



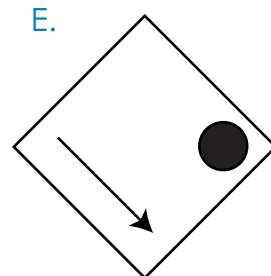
C.



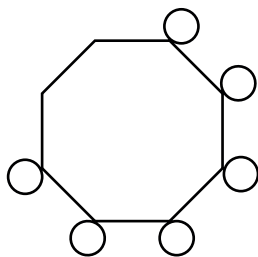
D.



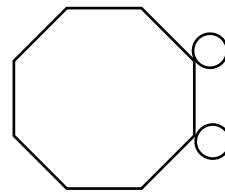
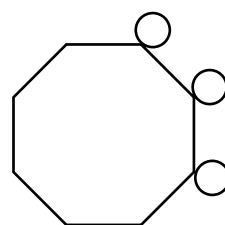
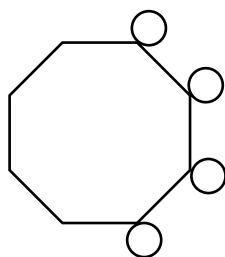
E.



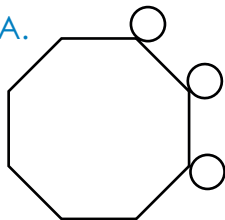
4.



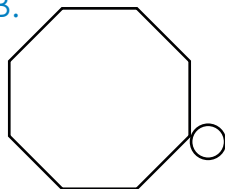
\_\_\_\_\_



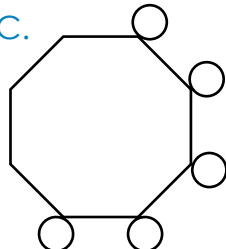
A.



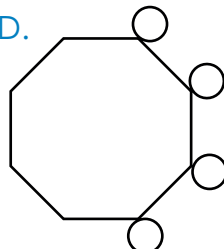
B.



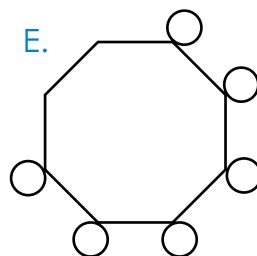
C.



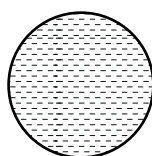
D.



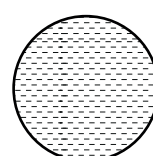
E.




5.




\_\_\_\_\_



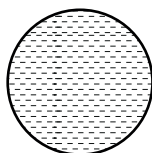
A.



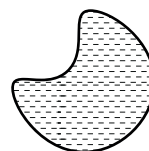
B.



C.



D.



E.





## SELF-REFLECTION

Take some time to reflect on your review test experience. Although they may sometimes feel stressful, exams can also be valuable learning opportunities.

### Your preparation

How confident did you feel going into the exam?



### Your performance

Did you have enough time to answer all the questions in the exam?

☐  
yes☐  
no

#### **Which topic were you most confident answering?**

VR Related Words

Percentages

VR Same Meaning

Tenses

Interpreting Data

VR Letter for Number

NVR Series

#### **Which topic would you like more practice on?**

VR Related Words

Percentages

VR Same Meaning

Tenses

Interpreting Data

VR Letter for Number

NVR Series

### What might you do differently next time?

In preparation for your next exam, write down one thing you will keep doing and one thing you will change for next time.

Keep	Change
<div></div>	<div></div>



## FULL COURSE REVIEW PART A

You have 25 minutes to complete the review test.

### VR Move a Letter

In the questions below, move **one** letter from the word on the left to the word on the right, to create **two** new words. The letters **must not** be rearranged. Both new words must make sense. Circle the letter that moves.

1. **send** **pace**

A. s

B. e

C. n

D. d

2. **march** **sash**

A. m

B. a

C. r

D. c

E. h

3. **share** **mile**

A. s

B. h

C. a

D. r

E. e

### Nouns

Identify the abstract noun in the sentence. Circle the correct answer.

4. **Honesty is always the best policy.**

A. Honesty

B. always

C. the

D. best

E. policy

In the questions below, choose the correct collective noun for the plural word in bold.

5. **puppies**

A. school

B. flock

C. colony

D. litter

E. army

6. **lions**

A. colony

B. school

C. pride

D. pod

E. swarm

### Adjectives

7. Choose the **two** adjectives in the sentence below.

Do you prefer green or red grapes?

A. Do

B. prefer

C. green

D. red

E. grapes

8. Choose the adjective in the sentence below.

My sister knitted me a beautiful jumper.

- A. sister      B. knitted      C. me      D. beautiful      E. jumper

### Decimals

9. Round 2.67 to the nearest whole number.

- A. 2      B. 26      C. 2.60      D. 3      E. 2.70

10.  $4.6 \times 10 =$

- A. 46      B. 460      C. 4.06      D. 4,600      E. 0.46

### VR Missing Word

In the sentences below, one word in capitals has had **three consecutive letters taken out**. These three letters on their own make **one correctly spelt word**, without changing the order. Choose the three-letter word from the options below.

11. I have a dental appointment to ATD at 11:30am today.

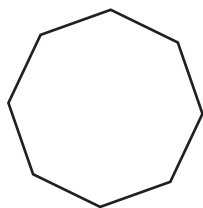
- A. tip      B. pin      C. top      D. pen      E. ten

12. My favourite sport is NETB, which I play every weekend with my friends.

- A. are      B. ate      C. all      D. arc      E. ape

### 2D Shapes: Triangles, Quadrilaterals & Polygons

Questions 13 and 14 refer to the shape below.



13. What is the name of this regular polygon?

- A. heptagon      B. octagon      C. hexagon      D. pentagon      E. nonagon

14. How many vertices does the shape have?

A. 5

B. 7

C. 8

D. 6

E. 9

### VR Word Connections

In the questions below, find the word that will complete the sentence in the best way.

15. **Letter** is to write, as **song** is to (music tune note pencil sing)

A. music

B. tune

C. note

D. pencil

E. sing

16. **Whole** is to hole, as **buy** is to (shop broken by money bite)

A. shop

B. broken

C. by

D. money

E. bite

### Comprehension

Read the information below about Komodo dragons and use the comprehension skills you have learnt to answer the questions that follow.

The Komodo dragon is the largest living lizard. A fierce predator, it can kill prey as large as a water buffalo. Hunted almost to extinction after Western scientists discovered the reptile on Komodo Island, Indonesia, in 1912, this species is currently protected under Indonesian law.

The Komodo dragon is a type of monitor lizard. Like other monitors, it has a long head and neck, a heavy body and a long tail. But the Komodo dragon is larger than all other lizards. It can reach a length of 3 metres. Some males weigh more than 135 kilograms.

The skin of a Komodo dragon is scaly and grey-brown in colour. Its tongue is yellowish and forked (split in two at the end). Like a snake, the lizard flicks its tongue in and out to get information about its surroundings.

Komodo dragons can run as fast as 13 miles per hour. They also are good climbers and swimmers. These lizards often eat carrion, or animals that are already dead. But they also hide along trails, waiting to pounce on passing cattle, deer, pigs or other animals. Adults even hunt smaller Komodo dragons. They use their sharp, curved teeth and claws to bite and tear their prey.

Female Komodo dragons lay eggs in deep burrows. The eggs hatch in April or May. The newly hatched young are about 45 centimetres long. They live in trees for several months. Komodo dragons may live for about 30 years.



17. In which year did scientists discover the Komodo dragon on Komodo Island?
- A. 1912      B. 1913      C. 1935      D. 1945      E. 1930
18. What length can a Komodo dragon reach?
- A. 135cm      B. 13m      C. 45cm      D. 3m      E. 30m
19. What colour is the skin of a Komodo dragon?
- A. brown-green      B. orange      C. grey-brown      D. grey-green      E. blue
20. How long do Komodo dragons live for?
- A. 3 years      B. 30 years      C. 13 years      D. 45 years      E. 135 years

### Place Value

21. What is the value of the underlined digit?

**4,382**

- A. 8      B. 18      C. 80      D. 800      E. 8,000

22. What is the value of the underlined digit?

**7,290**

- A. 7      B. 17      C. 70      D. 700      E. 7,000

23. Round the number below to the nearest 1,000.

**2,554**

- A. 2,000      B. 2,500      C. 1,500      D. 3,000      E. 4,000

### VR Jumbled Sentences

In the questions below, the words are a jumbled sentence, with **one** extra word. Unscramble the sentence to identify the superfluous word.

24. **walk dog bone day a twice I my**

- A. walk      B. bone      C. dog      D. twice      E. my

25. friend shopping coffee my together like go I and to

- A. friend      B. shopping      C. coffee      D. like      E. and

### Fractions

In the questions below, calculate the fractions of the amounts.

26.  $\frac{1}{4}$  of 32

- A. 8      B. 12      C. 6      D. 16      E. 20

27.  $\frac{2}{3}$  of 18

- A. 6      B. 10      C. 12      D. 14      E. 4

Choose the fraction with the highest value.

28.  $\frac{1}{2}$        $\frac{5}{8}$        $\frac{1}{4}$        $\frac{3}{4}$        $\frac{1}{8}$

- A.  $\frac{1}{2}$       B.  $\frac{5}{8}$       C.  $\frac{1}{4}$       D.  $\frac{3}{4}$       E.  $\frac{1}{8}$

### Factors & Multiples

29. 2 and 12 are factors of 36. Circle the **two** numbers below that are also factors of 36.

- A. 4      B. 5      C. 8      D. 10      E. 18

30. Which of the following numbers is the next multiple of 7?      **7, 14, 21, 28, 35, ?**

- A. 70      B. 42      C. 54      D. 84      E. 77

### VR Related Words

31. Identify the word that is the **odd one out**.

**(butter, milk, fridge, cheese, yoghurt)**

- A. butter      B. milk      C. fridge      D. cheese      E. yoghurt

32. Identify the word that is the **odd one out**.

**(blue, colour, pink, green, orange)**

- A. blue      B. colour      C. pink      D. green      E. orange

## Alliteration & Onomatopoeia

In the sentence below, choose the word that forms the **alliteration**.

33. The snake slithers \_\_\_\_\_ in the sand.

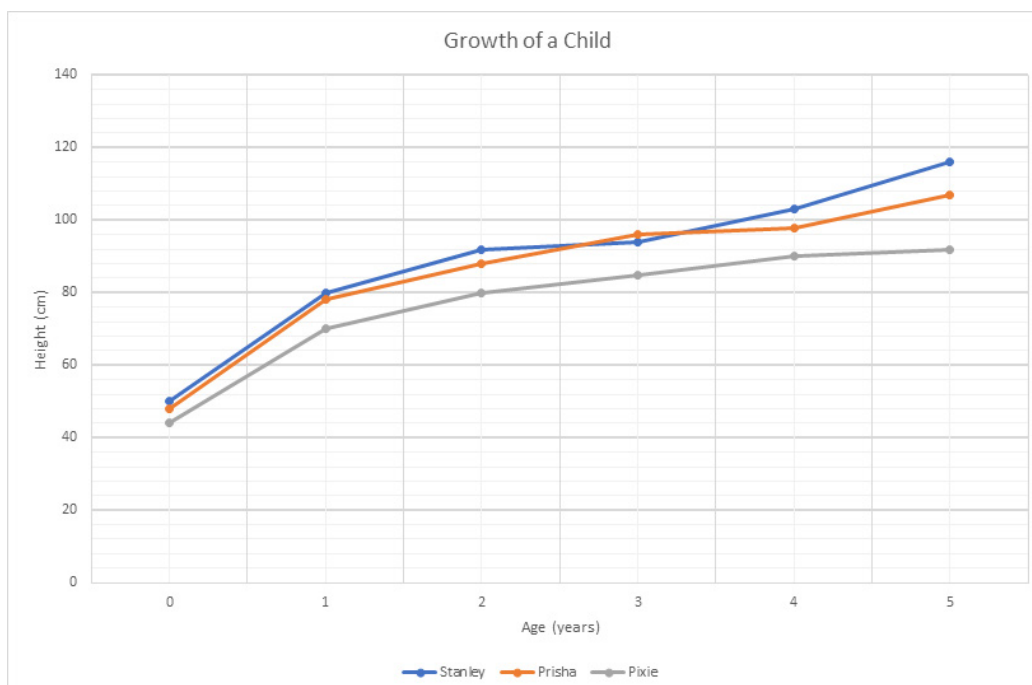
- A. quickly      B. quietly      C. loudly      D. weakly      E. slowly

Choose the **onomatopoeic word** to complete the sentence.

34. The mouse \_\_\_\_\_ as it ran across the room.

- A. squeaked      B. sang      C. bounced      D. slipped      E. tripped

## Interpreting Data



35. Who was the tallest when they were 3 years old?

- A. Stanley      B. Prisha      C. Pixie

36. How tall was Pixie when she was 2?

- A. 88cm      B. 80cm      C. 92cm      D. 68cm      E. 96cm

37. What is the difference in height between Pixie and Prisha when they were born?

- A. 1cm      B. 2cm      C. 3cm      D. 4cm      E. 5cm

## Problem Solving

In the questions below, choose the correct answer to the problem.

- 38.** The temperature of a substance in a chemistry experiment is recorded at  $-8^{\circ}$ . If the temperature is increasing at a rate of 3 degrees per minute, what will the temperature be in 10 minutes?
- A.  $-11^{\circ}$       B.  $-38^{\circ}$       C.  $-5^{\circ}$       D.  $16^{\circ}$       E.  $22^{\circ}$
- 39.** At a theme park you go on your first ride at 12:45pm. You go on a ride every 11 minutes. At what time do you go on your fourth ride?
- A. 12:56pm      B. 1:07pm      C. 1:18pm      D. 1:22pm      E. 1:36pm
- 40.** Katrina can jump four times higher than Sylvia, but Edward can only jump half the height of Katrina. If Sylvia can jump 4m high, how high can Edward jump?
- A. 16m      B. 12m      C. 2m      D. 8m      E. 7m



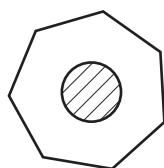
## FULL COURSE REVIEW PART B

You have 8 minutes to complete the review test.

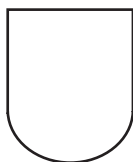
### NVR Similarities

In the questions below, choose the figure that is most closely similar to the clue figures.


1.




A.



B.



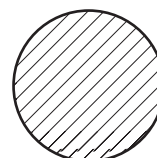
C.




D.



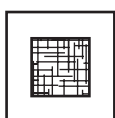
E.



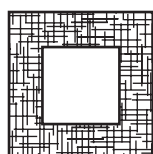
2.



A.



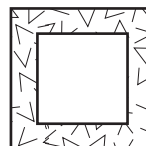
B.



C.



D.



E.



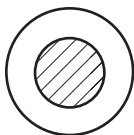
3.




A.



B.



C.



D.



E.

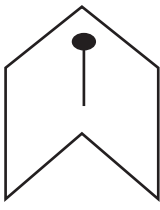


### NVR Odd One Out

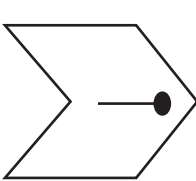
In the questions below, choose the figure that is the odd one out.

4.

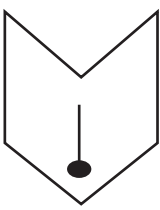
A.



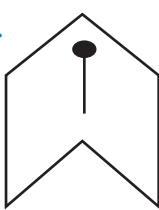
B.



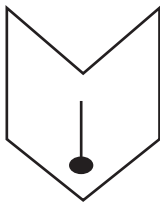
C.



D.




E.




5.


A.




B.




C.



D.

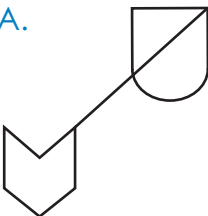


E.

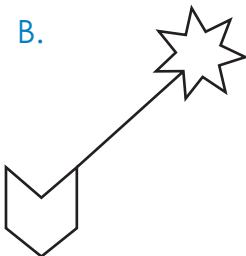


6.

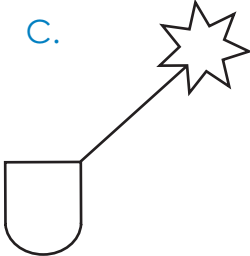
A.



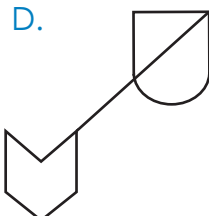
B.



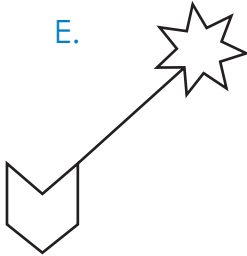
C.



D.



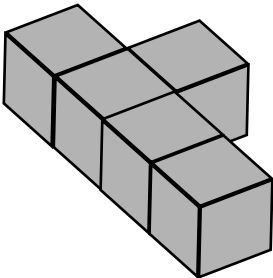
E.



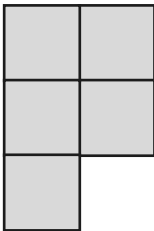
### 3D Plan Views

In the questions below, select the option that is the plan view of the 3D shape.


7.



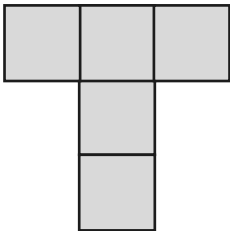
A.



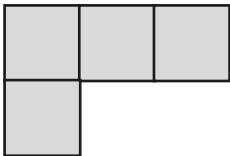
B.



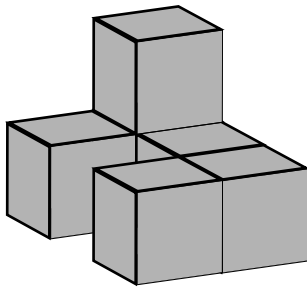
C.



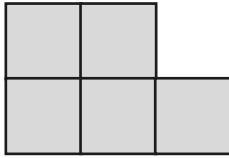
D.



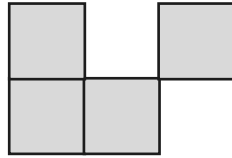
8.



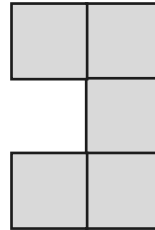
A.



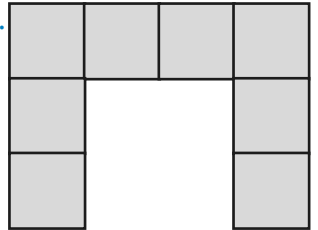
B.



C.



D.




## NVR Codes

In the questions below, choose the missing code.

9.




ST



DL



RF



DT



?


A. RT

B. RL

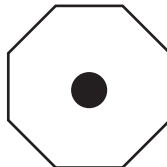
C. SL

D. DF

10.



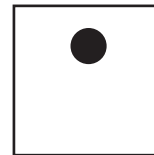
WG



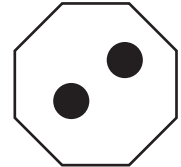
QC



BC



WC



?

A. WC

B. BG

C. QB

D. QG



## COURSE REFLECTIONS

Take some time to reflect on this course and answer the questions below.

1. How confident do you feel moving on to the next course?



2. What did you enjoy the most?

---

---

---

3. What were your least favourite parts of the course?

---

---

---

4. What challenges did you face?

---

---

---

5. How did you overcome these challenges?

---

---

---

6. Which areas would you like to continue to practise in the course next year?

---

---

---





## SPELLING LOG

Record any new spellings that you wish to practise in the table below.

Word	Sentence (word in context)

# Explore

LEARNING

