


# Fractions

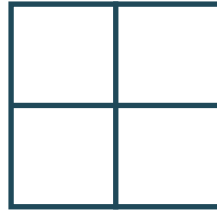
Year 3 / P4

Activity 1


Colour and label the below fractions.




$$\frac{1}{2}$$




$$\frac{1}{4}$$




$$\frac{2}{6}$$



$$\frac{1}{3}$$



$$\frac{\square}{\square}$$




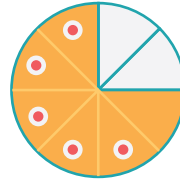

$$\frac{\square}{\square}$$

# Fractions

Year 3 / P4

## Activity 2

Draw lines to match the fractions to the correct image using different colours for each one!



$$\frac{2}{3}$$

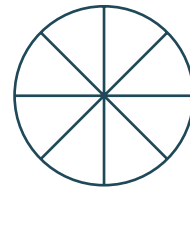
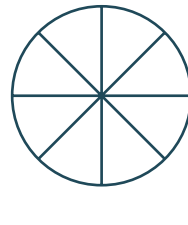
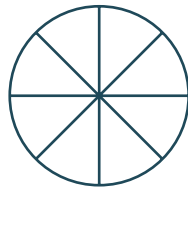
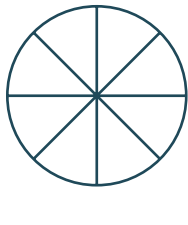
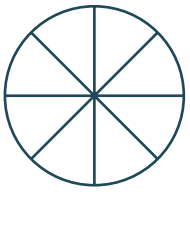
$$\frac{5}{8}$$

$$\frac{1}{2}$$

$$\frac{3}{4}$$

## Activity 3

Make your own fractions by shading in the circles below and write the answer next to them.



## Activity 4

Order these fractions from smallest to largest.

$$\frac{98}{100}$$

$$\frac{2}{8}$$

$$\frac{1}{4}$$

$$\frac{7}{10}$$

$$\frac{1}{3}$$

\_\_\_\_\_

\_\_\_\_\_

\_\_\_\_\_

\_\_\_\_\_

\_\_\_\_\_