

# Fractions

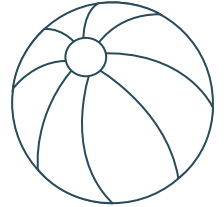
Year 1 / P2

## Activity 1

Find 6 toys from around your house.

Split them in half. This means you will have two groups with an equal amount in each.

Draw the toys in their two groups below:



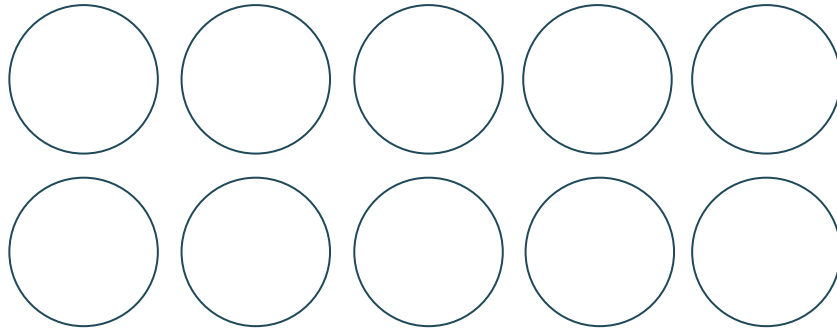
How many toys are there in each group? \_\_\_\_\_

# Fractions

Year 1 / P2


## Activity 2

There are ten marbles, colour in half of them.



## Activity 3

Colour in half the apple.



## Activity 4

Colour in two quarters of the apple.

