

Test Book

Levels 1-3 Maths & English



Name:

CONTENTS

| Test | Topics Covered | Page no. | Score |
|--------------------|---|------------|-------|
| Review Test 1 | Arithmetic, Nouns, Probability, Spelling: Prefixes, Suffixes & Roots | Page 3–6 | |
| Review Test 2 | 2D Shapes, Comprehension, Sequences, Verbs | Page 7–12 | |
| Review Test 3 | Special Numbers, Writing Features, Factors & Multiples, Adjectives | Page 13–17 | |
| Review Test 4 | Place Value, Alliteration & Onomatopoeia, Perimeter & Area, Vocabulary in Context | Page 18–23 | |
| Review Test 5 | 3D Shapes, Comprehension, Fractions, Direct & Reported Speech | Page 24–30 | |
| Review Test 6 | Conversion & Measurement, Continuous Writing, Symmetry, Editing | Page 31–35 | |
| Review Test 7 | Decimals, Synonyms & Antonyms, Interpreting Data, Essay Writing | Page 36–41 | |
| Review Test 8 | 2D Shapes, Spelling: Plurals, Problem Solving, Adverbs & Adverbials | Page 42–45 | |
| Review Test 9 | Transformations, Position & Co-ordinates, Spelling: Silent Letters, Percentages, Tenses, Punctuation, Ratio | Page 46–51 | |
| Full Course Review | Selection of topics from across the course | Page 52–59 | |
| Course Reflections | | Page 60 | |

What is a review test?

You will complete regular review tests throughout this course. Each review test will last 20 minutes (30 minutes if the test includes a writing task) and will then be marked and reviewed with your tutor. **PLEASE DO NOT COMPLETE ANY OF THESE TESTS AT HOME.** The review tests are designed to:

- Check for learning of concepts covered.
- Highlight areas of strength and areas for additional practice.
- Practise exam techniques learnt in lessons under exam conditions.

Marking and Feedback

Once you have completed a 'review test' you will mark it alongside your tutor. Add your score next to each test in the contents table on Page 1.

Reflecting helps you to develop your skills and review their effectiveness. To be self-aware is to be able to realistically assess your strengths, areas for development and set goals, while maintaining a positive mindset. You will get some time after each test for self-reflection and an opportunity to use Compass to work on any tricky topics from the test.

ANSWER GUIDES

There is dedicated time within each course planner to mark and review each test.

Most of the level 1-3 tests will be marked within the session that they are completed.

If you would like access to the answers for each of the tests within this book, please scan the QR code below.



**SCAN ME TO FIND THE ANSWERS TO ALL
TESTS IN THIS BOOK.**



REVIEW TEST 1

You have **20 minutes** to complete the review test.

Arithmetic

In the questions below, choose the correct mathematical sign or number to complete the calculation.

1. $24 \square 3 = 72$

A. +

B. -

C. \div

D. \times

E. >

2. $\square \div 9 = 6$

A. 45

B. 48

C. 54

D. 56

E. 63

3. $125 - \square = 36$

A. 83

B. 85

C. 87

D. 89

E. 91

4. $2 \times 6 + \square = 80$

A. 60

B. 68

C. 54

D. 62

E. 46

5. $\square + 24 - 52 = 119$

A. 130

B. 138

C. 142

D. 145

E. 147

Nouns

Choose the correct **collective noun** for the plural noun below. Circle the correct answer.

6. **birds**

A. gaggle

B. herd

C. school

D. flock

E. flight

In the questions below, identify the abstract noun in the sentence. Circle the correct answer.

7. I am starting to lose faith in the service at my favourite restaurant.

A. starting

B. lose

C. faith

D. service

E. restaurant

8. Tegan has a fear of poisonous snakes.

- A. Tegan B. fear C. of D. poisonous E. snakes

In the questions below, select the type of noun for the word in bold. Circle the correct answer.

9. Farhad travelled to **Tehran**, the capital city of Iran, to visit friends.

- A. abstract B. proper C. common D. collective E. concrete

10. Mona was sure she could see a **planet** through her new telescope.

- A. abstract B. proper C. common D. collective E. concrete

Probability

11. What is the probability you will pick a diamond card from a deck of 52 cards, in its simplest form?

- A. $\frac{1}{2}$ B. $\frac{39}{52}$ C. $\frac{1}{4}$ D. $\frac{13}{52}$ E. $\frac{1}{8}$

12. The names of the months of the year are in a bag. What is the probability of choosing a month beginning with J?

- A. $\frac{1}{12}$ B. $\frac{1}{2}$ C. $\frac{1}{6}$ D. $\frac{2}{6}$ E. $\frac{1}{4}$

13. The names of the days of the week are in a bag. What is the probability of choosing a day beginning with T?

- A. $\frac{2}{7}$ B. $\frac{5}{7}$ C. $\frac{6}{7}$ D. $\frac{3}{7}$ E. $\frac{4}{7}$

14. A box contains 2 orange marbles, 3 white marbles, 4 green marbles and 1 purple marble. What is the probability of selecting an orange marble if the purple marble is removed?

- A. $\frac{1}{5}$ B. $\frac{2}{9}$ C. $\frac{1}{3}$ D. $\frac{2}{10}$ E. $\frac{4}{9}$

15. Describe the probability of a coin landing on heads rather than tails.

- A. impossible B. very unlikely C. equal D. very likely E. certain

Spelling: Prefixes, Suffixes & Roots

What is the **root word** in the word below? Circle your answer.

16. **misunderstand**

- A. understand B. mis C. and D. stand E. under

In the questions below, circle the correct prefix for the underlined word in the sentence.

17. The rainbow didn't last long. I wonder if this rain will make it appear.

- A. mis B. re C. pre D. ir E. un

18. They were happy with their results, after all the hard work they had put in.

- A. mis B. re C. dis D. ir E. un

In the questions below, circle the correct suffix for the underlined word in the sentence.

19. I lost the game because of many care mistakes.

- A. less B. ful C. ly D. ment E. ness

20. The neighbourhood is fear of rising crime in the area.

- A. less B. ful C. ly D. ment E. ness



SELF-REFLECTION

Take some time to reflect on your review test experience. Although they may sometimes feel stressful, exams can also be valuable learning opportunities.

Your preparation

How confident did you feel going into the exam?



Your performance

Did you have enough time to answer all the questions in the exam?

☐
yes☐
no

Which topic were you most confident answering?

Arithmetic

☐

Nouns

☐

Probability

☐

Prefixes, Suffixes & Roots

☐

Which topic would you like more practice on?

Arithmetic

☐

Nouns

☐

Probability

☐

Prefixes, Suffixes & Roots

☐

What might you do differently next time?

In preparation for your next exam, write down one thing you will keep doing and one thing you will change for next time.

| Keep | Change |
|------|--------|
| | |

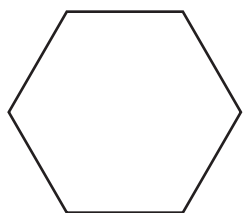


REVIEW TEST 2

You have **20 minutes** to complete the review test.

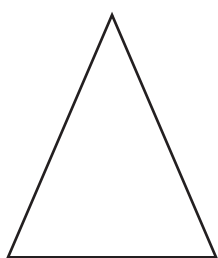
2D Shapes: Triangles, Quadrilaterals & Polygons

Questions 1 and 2 refer to the shape below.



1. What is the name of this regular polygon?
A. heptagon B. octagon C. hexagon D. pentagon E. nonagon
2. How many vertices does the shape have?
A. 0 B. 2 C. 3 D. 5 E. 6

3. What type of triangle is shown below?

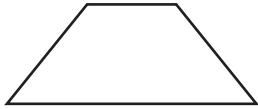


- A. equilateral B. right angle C. isosceles D. scalene
4. Complete the sentence below. Choose the correct answer from the options.

All angles in a triangle add up to _____.

- A. 160° B. 180° C. 190° D. 90° E. 360°

5. Complete the table below to show the **properties of a trapezium**. Put a tick or a cross to show whether the statements are true or false. The first one has been done for you.



| | True | False |
|-------------------------------|------|-------|
| Has 4 sides | ✓ | |
| Has 4 vertices | | |
| Has 4 acute-angled corners | | |
| Has 2 pairs of parallel lines | | |
| Has no perpendicular lines | | |

Comprehension

Read the extract from *Alice's Adventures in Wonderland* below and answer the questions that follow.

You may want to refer back to the active reading technique and begin by reading the questions first. Knowing the questions you have to answer before you read a text may help you focus.

From *Alice's Adventures in Wonderland* by Lewis Carroll

The rabbit-hole went straight on like a tunnel for some way, and then dipped suddenly down, so suddenly that Alice had not a moment to think about stopping herself before she found herself falling down what seemed to be a very deep well.

Either the well was very deep, or she fell very slowly, for she had plenty of time as she went down to look about her, and to wonder what was going to happen next. First, she tried to look down and make out what she was coming to, but it was too dark to see anything; then she looked at the sides of the well and noticed that they were filled with cupboards and book-shelves: here and there she saw maps and pictures hung upon pegs. She took down a jar from one of the shelves as she passed; it was labelled "ORANGE MARMALADE," but to her disappointment it was empty; she did not like to drop the jar for fear of killing somebody underneath, so managed to put it into one of the cupboards as she fell past it.

"Well!" thought Alice to herself. "After such a fall as this, I shall think nothing of tumbling down stairs! How brave they'll all think me at home! Why, I wouldn't say anything about it, even if I fell off the top of the house!" (Which was very likely true.)

Down, down, down. Would the fall never come to an end? "I wonder how many miles I've fallen by this time?" she said aloud. "I must be getting somewhere near the centre of the earth. Let me see: that would be four thousand miles down. I think—" (for, you see, Alice had learnt several things of this sort in her lessons in the schoolroom, and though this was not a very good opportunity for showing off her knowledge, as there was no one to listen to her, still it was good practice to say it over).

6. Circle the example of a simile used by the author in the first paragraph.

- A. then dipped suddenly down
- B. the rabbit-hole went straight on like a tunnel
- C. suddenly that Alice had not a moment to think
- D. stopping herself before she found herself falling

7. Why could Alice not see anything as she was falling?

- A. She was blindfolded.
- B. She was falling too quickly.
- C. Shelves were blocking her view.
- D. It was too dark.
- E. There was nothing to see.

8. What did Alice notice in the cupboards and book-shelves?

- A. maps and jam jars
- B. pegs and rabbits
- C. pictures and books
- D. clocks and plants
- E. maps and pictures

9. What did Alice do with the jar of marmalade after finding it was empty?
- A. Dropped it down the well.
 - B. Gave it to her cat.
 - C. Put it into one of the cupboards.
 - D. Hung it on a peg.
 - E. Let it tumble down the stairs.
10. What makes Alice think she is near the centre of the earth?
- A. She has been falling for so long.
 - B. It is hot like the sun.
 - C. She has learnt about it at school.
 - D. She can see signposts for the centre of the earth.
 - E. She can see lava.

Sequences

In the questions below, find the number that continues the sequence in the most sensible way.

11. 33, 44, 55, 66, 77, ?
- | | | | | |
|-------|-------|-------|-------|-------|
| A. 78 | B. 88 | C. 98 | D. 87 | E. 79 |
|-------|-------|-------|-------|-------|
12. 2, 4, 5, 10, 11, ?
- | | | | | |
|-------|-------|-------|-------|-------|
| A. 23 | B. 20 | C. 21 | D. 22 | E. 24 |
|-------|-------|-------|-------|-------|
13. 7, 11, 9, 13, 11, ?
- | | | | | |
|-------|------|-------|-------|-------|
| A. 15 | B. 9 | C. 13 | D. 14 | E. 16 |
|-------|------|-------|-------|-------|
14. 13, 14, 16, 19, 23, ?
- | | | | | |
|-------|-------|-------|-------|-------|
| A. 27 | B. 26 | C. 28 | D. 25 | E. 29 |
|-------|-------|-------|-------|-------|
15. 43, 46, 50, 53, 57, ?
- | | | | | |
|-------|-------|-------|-------|-------|
| A. 61 | B. 59 | C. 62 | D. 63 | E. 60 |
|-------|-------|-------|-------|-------|

Verbs

In the questions below, choose the **verb** from each sentence.

16. The rabbit hopped away quickly.

- A. The B. rabbit C. hopped D. away E. quickly

17. Rishi revised every night for her maths test.

- A. revised B. every C. night D. her E. test

18. Martin travelled two hours on the train to work every day.

- A. travelled B. two C. hours D. train E. work

In the questions below, choose the correct **verb** to complete the sentence.

19. Sophia _____ her teeth every morning before school.

- A. cleared B. cleans C. clean D. cleaner E. cleanse

20. The man _____ all night to get the project finished.

- A. works B. worker C. worked D. work E. walk

21. I _____ five pieces of fruit every day.

- A. eaten B. eat C. eatery D. eats E. eating

22. I _____ over the fence when I was running yesterday.

- A. jumps B. jumper C. jumped D. jumping E. jump

In the questions below, choose the **modal verb** from each sentence.

23. I should go and visit Grandma.

- A. I B. should C. go D. visit E. Grandma

24. They may go to the beach at the weekend.

- A. may B. go C. the D. beach E. weekend

25. I must go for a run before work.

- A. I B. must C. go D. run E. before



SELF-REFLECTION

Take some time to reflect on your review test experience. Although they may sometimes feel stressful, exams can also be valuable learning opportunities.

Your preparation

How confident did you feel going into the exam?



Your performance

Did you have enough time to answer all the questions in the exam?

☐
yes☐
no

Which topic were you most confident answering?

2D Shapes

| |
|--|
| |
| |
| |
| |

Comprehension

Sequences

Verbs

Which topic would you like more practice on?

2D Shapes

| |
|--|
| |
| |
| |
| |

Comprehension

Sequences

Verbs

What might you do differently next time?

In preparation for your next exam, write down one thing you will keep doing and one thing you will change for next time.

| Keep | Change |
|------|--------|
| | |



REVIEW TEST 3

You have **20 minutes** to complete the review test.

Special Numbers: Prime Numbers, Roman Numerals & Negative Numbers

1. Complete the number series below with the next **prime number**.

7, 11, 13, 17, 19, ?

A. 21

B. 23

C. 25

D. 27

E. 29

2. Complete the table below to show whether the numbers are prime, or not.

| | Prime | Not Prime |
|----|-------|-----------|
| 7 | | |
| 10 | | |
| 11 | | |
| 15 | | |
| 17 | | |

3. Which list of integers below is in the correct numerical order, from smallest on the left to largest on the right?

A. -7, -9, 1, -2, 3

B. -9, -7, -2, 1, 3

C. 1, -2, 3, -7, -9

D. 3, 1, -2, -7, -9

4. Which of the options below is the Roman numeral for **52**?

A. LII

B. LXII

C. XLII

D. ILL

E. XXXII

5. Draw lines to match the Roman numerals to their numbers.

| | |
|----|-------|
| 75 | XXI |
| 97 | LXXV |
| 21 | XCVII |

Writing Features

6. Which of these is **not** a typical feature of a newspaper?

- A. headline
- B. name of the newspaper
- C. pictures with captions
- D. informal language
- E. direct and reported speech

7. Look at the newspaper headline below. What literary technique does it use?

Blind dog becoming very pup-ular on social media!

- A. pun
- B. alliteration
- C. rhetorical question
- D. hyperbole
- E. metaphor

8. Look at the letter below. What is the purpose of this letter?



- A. inform
- B. persuade
- C. invite
- D. complain
- E. request

9. An informative text informs the reader about a topic by providing accurate facts. Which of the statements below is **not** a fact?

- A. South America is the fourth-largest continent in the world.
- B. Machu Picchu is the most visited tourist destination in Peru.
- C. With only 15mm of rain a year, the Atacama Desert in Chile is one of the driest places on Earth.
- D. Rio de Janeiro is a great city to visit during the carnival.
- E. The capital city of Brazil is Brasilia.

10. Which of the following would **most likely** be a form of persuasive writing?

A. postcard to a friend

B. non-fiction story

C. playscript

D. advert

E. newspaper article

Factors & Multiples

11. Which of the following numbers is the next multiple of 6?

42, 48, 54, 60, 66, 72, ?

A. 76

B. 78

C. 80

D. 82

E. 86

12. **12 and 24 are factors of 24.**

Circle **one** number below that is also a factor of 24.

A. 1

B. 5

C. 7

D. 9

E. 11

13. **12 and 3 are factors of 36.**

Circle **one** number below that is also a factor of 36.

A. 9

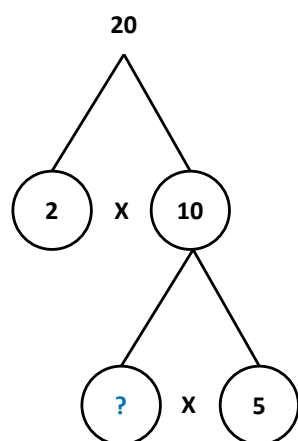
B. 10

C. 11

D. 14

E. 16

14. **Circle the number that would complete the gap on the factor tree.**



A. 5

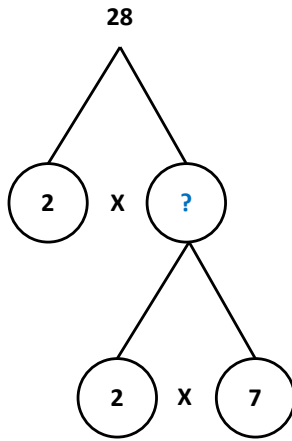
B. 4

C. 2

D. 20

E. 10

15. Circle the number that would complete the gap on the factor tree.



A. 32

B. 14

C. 16

D. 8

E. 21

Adjectives

In the questions below, choose the word that is the adjective in the sentence.

16. She wore a beautiful dress to her friend's wedding.

A. wore

B. beautiful

C. dress

D. friend's

E. wedding

17. He stood out in a red shirt.

A. He

B. stood

C. out

D. red

E. shirt

18. They saw him with their own eyes.

A. They

B. saw

C. him

D. their

E. own

19. She spoke so fast, I couldn't keep up!

A. spoke

B. so

C. fast

D. couldn't

E. keep

20. The baby looked adorable when he was sleeping.

A. baby

B. looked

C. adorable

D. was

E. sleeping



SELF-REFLECTION

Take some time to reflect on your review test experience. Although they may sometimes feel stressful, exams can also be valuable learning opportunities.

Your preparation

How confident did you feel going into the exam?



Your performance

Did you have enough time to answer all the questions in the exam?

☐
yes☐
no

Which topic were you most confident answering?

Special Numbers

Writing Features

Factors & Multiples

Adjectives

Which topic would you like more practice on?

Special Numbers

Writing Features

Factors & Multiples

Adjectives

What might you do differently next time?

In preparation for your next exam, write down one thing you will keep doing and one thing you will change for next time.

| Keep | Change |
|-------------|-------------|
| <div></div> | <div></div> |



REVIEW TEST 4

You have **20 minutes** to complete the review test.

Place Value

1. What is the value of the underlined digit?

5,673

A. 7 B. 17 C. 70 D. 700 E. 7,000

2. What is the value of the underlined digit?

2,160

A. 2 B. 12 C. 20 D. 200 E. 2,000

3. What is the value of the underlined digit?

1,982

A. 9 B. 19 C. 90 D. 900 E. 9,000

4. What is the value of the underlined digit?

8,346

A. 6 B. 16 C. 60 D. 600 E. 6,000

5. What is the value of the underlined digit?

3,017

A. 1 B. 11 C. 10 D. 100 E. 1,000

6. Round the number below to the nearest 1,000.

1,345

A. 100 B. 1,000 C. 1,500 D. 2,000 E. 1,300

7. Round the number below to the nearest 1,000.

4,698

A. 4,000 B. 4,500 C. 4,600 D. 5,000 E. 6,000

8. Round the number below to the nearest 1,000.

3,165

- A. 3,000 B. 3,100 C. 3,500 D. 4,000 E. 4,500
9. Which set of numbers below is ordered from smallest to largest?
- A. 1,003, 1,030, 1,004, 1,040, 1,031
- B. 1,003, 1,004, 1,030, 1,031, 1,040
- C. 1,030, 1,040, 1,003, 1,031, 1,004
- D. 1,031, 1,003, 1,030, 1,004, 1,040
- E. 1,004, 1,040, 1,030, 1,031, 1,003
10. Which set of numbers below is ordered from smallest to largest?
- A. 13,657, 13,659, 13,560, 13,675, 13,660
- B. 13,560, 13,657, 13,659, 13,660, 13,675
- C. 13,675, 13,660, 13,659, 13,657, 13,560
- D. 13,660, 13,657, 13,659, 13,675, 13,560
- E. 13,659, 13,657, 13,560, 13,660, 13,675

Alliteration & Onomatopoeia

11. Does this sentence contain alliteration?

Barbara bought a big bronze box of beautiful books.

- A. True B. False

12. Does this sentence contain alliteration?

The leaves in the trees rustled.

- A. True B. False

13. Does this sentence contain alliteration?

Hamza hurried home to watch the final on TV.

- A. True B. False

14. Does this sentence contain onomatopoeia?

The snake hissed at the intruder.

A. True

B. False

15. Does this sentence contain onomatopoeia?

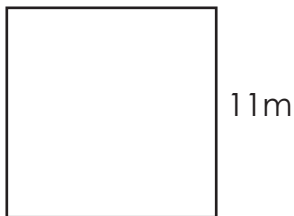
The waves crashed against the side of the rocks.

A. True

B. False

Perimeter & Area

16. This shape is a square. What is its perimeter?



A. 44m

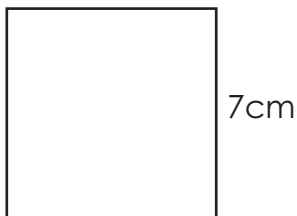
B. 121cm

C. 44cm

D. 121m

E. 22m

17. What is the area of this square?



A. 14cm^2

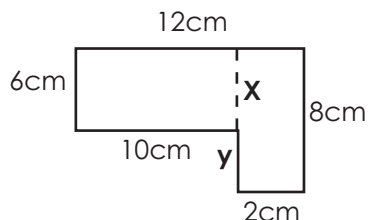
B. 21cm^2

C. 28cm^2

D. 49cm^2

E. 35cm^2

18. Calculate the area of the shape below.



A. 60cm^2

B. 38cm^2

C. 16cm^2

D. 76cm^2

E. 46cm^2

19. A rectangle has a length of 6cm and a width of 3cm. What is its perimeter?

A. 18cm

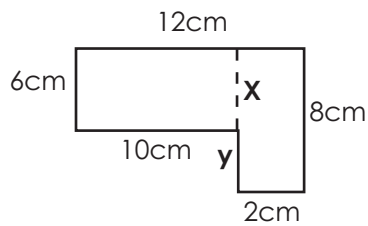
B. 9cm

C. 10cm

D. 12cm

E. 16cm

20. What is the value of y in the shape below?



A. 6cm

B. 2cm

C. 8cm

D. 3cm

E. 4cm

Vocabulary in Context

In the questions below, read the sentence and use the context clues to determine the meaning of the word in bold.

21. The team are running very low on players. They must **acquire** new ones.

A. learn a new skill

B. buy or obtain

C. give to someone

D. take from someone

22. My heart started to beat faster, as I was trapped in the lift in such a **confined** space.

A. unable to leave

B. to take ill suddenly

C. to hold against someone's will

D. small or restricted

23. They know I don't like that. I was hurt but they **deliberately** set out to upset me.

A. done with intent

B. done with conscience

C. done with humour

D. done with verbal communication

24. The cottages in the small rural village were so **quaint**; like something out of an old movie!
- A. old and quirky
 - B. modern and colourful
 - C. cosy and small
 - D. cute and old-fashioned
25. I couldn't resist the chocolate any longer and gave in to **temptation**.
- A. an act of kindness
 - B. strong feeling of support
 - C. desire to do something
 - D. intention to be kind



SELF-REFLECTION

Take some time to reflect on your review test experience. Although they may sometimes feel stressful, exams can also be valuable learning opportunities.

Your preparation

How confident did you feel going into the exam?



Your performance

Did you have enough time to answer all the questions in the exam?

☐
yes☐
no

Which topic were you most confident answering?

Place Value

Alliteration & Onomatopoeia

Perimeter & Area

Vocabulary in Context

| |
|--|
| |
| |
| |
| |

Which topic would you like more practice on?

Place Value

Alliteration & Onomatopoeia

Perimeter & Area

Vocabulary in Context

| |
|--|
| |
| |
| |
| |

What might you do differently next time?

In preparation for your next exam, write down one thing you will keep doing and one thing you will change for next time.

| Keep | Change |
|------|--------|
| | |

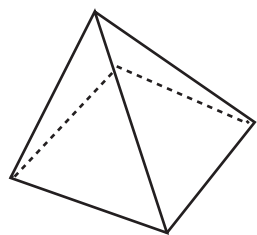


REVIEW TEST 5

You have **20 minutes** to complete the review test.

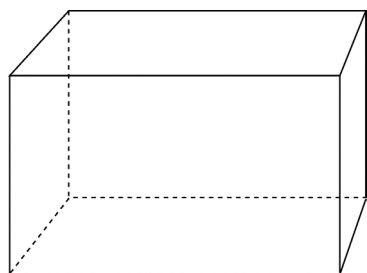
3D Shapes

Questions 1–2 refer to the shape below.



1. What is the name of the shape?
A. rectangular pyramid B. triangular prism C. square-based pyramid D. rectangular prism E. triangular pyramid
2. How many edges does the shape have?
A. 8 B. 5 C. 10 D. 6 E. 7

Questions 3–4 refer to the shape below.



3. What is the name of the shape?
A. cube B. rectangular prism C. 90 D. cuboid E. 9,000
4. How many vertices does this shape have?
A. 4 B. 8 C. 6 D. 10 E. 12
5. Which 3D shape has no edges or vertices?
A. pyramid B. cube C. cuboid D. cone E. sphere

Comprehension

Read the extract from *Alice's Adventures in Wonderland* below and answer the questions that follow.

From *Alice's Adventures in Wonderland* by Lewis Carroll

It was the White Rabbit, trotting slowly back again, and looking anxiously about as it went, as if it had lost something; and she heard it muttering to itself 'The Duchess! The Duchess! Oh my dear paws! Oh my fur and whiskers! She'll get me executed, as sure as ferrets are ferrets! Where can I have dropped them, I wonder?' Alice guessed in a moment that it was looking for the fan and the pair of white kid gloves, and she very good-naturedly began hunting about for them, but they were nowhere to be seen – everything seemed to have changed since her swim in the pool, and the great hall, with the glass table and the little door, had vanished completely.

Very soon the Rabbit noticed Alice, as she went hunting about, and called out to her in an angry tone, 'Why, Mary Ann, what are you doing out here? Run home this moment, and fetch me a pair of gloves and a fan! Quick, now!' And Alice was so much frightened that she ran off at once in the direction it pointed to, without trying to explain the mistake it had made.

'He took me for his housemaid,' she said to herself as she ran. 'How surprised he'll be when he finds out who I am! But I'd better take him his fan and gloves—that is, if I can find them.' As she said this, she came upon a neat little house, on the door of which was a bright brass plate with the name 'W. RABBIT' engraved upon it. She went in without knocking, and hurried upstairs, in great fear lest she should meet the real Mary Ann, and be turned out of the house before she had found the fan and gloves.

6. What does Alice assume the White Rabbit is looking for? Circle **two** answers.

- A. The Duchess
- B. the ferret
- C. the fan
- D. the glass table
- E. the pair of white kid gloves

7. White Rabbit confuses Alice for Mary Ann. What is Mary Ann's occupation?

- A. Waitress
- B. Housemaid
- C. Teacher
- D. Painter
- E. Swimmer

8. **Run** home this moment, and fetch me a pair of gloves and a fan!

In the sentence above, what type of word is the word in bold?

- A. Verb
- B. Common Noun
- C. Adjective
- D. Preposition
- E. Conjunction

9. Choose the best definition for the word '**engraved**'.

- A. To make an impression on someone's mind.
- B. To place or fix into position ready for use.
- C. To enclose or integrate firmly.
- D. Cut or carve a text or design on the surface of a hard object.
- E. Emphasise that you will never forget something.

10. How did Alice know which house belonged to White Rabbit?

- A. White Rabbit tells Alice it's his house.
- B. There's a signpost.
- C. The housemaid tells Alice.
- D. The street is named after him.
- E. His name was on the house.

Fractions

In the questions below, calculate the fractions of the amounts.

11. $\frac{1}{4}$ of 8

- A. 4 B. 2 C. 3 D. 6 E. 8

12. $\frac{1}{2}$ of 22

- A. 20 B. 10 C. 11 D. 8 E. 9

13. $\frac{2}{3}$ of 27

- A. 9 B. 12 C. 16 D. 18 E. 23

14. $\frac{1}{2}$ of 16

- A. 7 B. 8 C. 10 D. 12 E. 14

15. $\frac{3}{4}$ of 48

- A. 12 B. 24 C. 28 D. 34 E. 36

In the questions below, choose the fraction with the highest value.

16. $\frac{1}{3}$ $\frac{3}{4}$ $\frac{5}{12}$ $\frac{1}{2}$ $\frac{5}{6}$

- A. $\frac{1}{3}$ B. $\frac{3}{4}$ C. $\frac{5}{12}$ D. $\frac{1}{2}$ E. $\frac{5}{6}$

17. $\frac{1}{15}$ $\frac{2}{3}$ $\frac{4}{5}$ $\frac{1}{3}$ $\frac{7}{15}$

- A. $\frac{1}{15}$ B. $\frac{2}{3}$ C. $\frac{4}{5}$ D. $\frac{1}{3}$ E. $\frac{7}{15}$

18. $\frac{3}{4}$ $\frac{1}{6}$ $\frac{7}{12}$ $\frac{2}{3}$ $\frac{1}{2}$

- A. $\frac{3}{4}$ B. $\frac{1}{6}$ C. $\frac{7}{12}$ D. $\frac{2}{3}$ E. $\frac{1}{2}$

In the questions below, choose the correct answer for the calculation.

19. $\frac{4}{6} + \frac{9}{12} =$

- A. $\frac{13}{18}$ B. $1\frac{5}{12}$ C. $\frac{15}{12}$ D. $\frac{13}{12}$ E. $\frac{16}{12}$

20. $\frac{3}{5} - \frac{1}{3} =$

- A. $\frac{4}{8}$ B. $\frac{4}{5}$ C. $\frac{2}{2}$ D. $\frac{2}{5}$ E. $\frac{4}{15}$

Direct & Reported Speech

In the questions below, choose the option that correctly changes the sentence **from direct to reported speech**.

21. "I bid you farewell, friends!" shouted the alien from his spaceship.

- A. The alien shouted goodbye to his friends.
- B. From his spaceship, the alien bid farewell to his friends.
- C. "The alien bid farewell to his friends from his spaceship."
- D. The alien left on his spaceship and shouted farewell to his friends.

22. "We should all go and see a movie," announced Fred.

- A. "Fred wants to go and see a movie."
- B. Fred begs his friends to go to the movies with him.
- C. Fred announced that they should all go and see a movie.
- D. Fred announces that he loves going to the movies.

23. "I feel disappointed to have missed out on the gold medal," sighed the athlete.

- A. The athlete felt disappointed to have missed out on the gold medal.
- B. The athlete should have done better.
- C. "The athlete wanted to win a gold medal."
- D. The athlete let out a long sigh over not winning a gold medal.

In the questions below, choose the option that correctly changes the sentence **from reported to direct speech**.

24. The boy shouted that he would like an ice cream.

- A. I want a chocolate ice cream, shouted the boy.
- B. "The ice cream van is here!" exclaimed the boy.
- C. "Can I have an ice cream, please?"
- D. "I would like an ice cream!" shouted the boy.

25. As she was taking the photograph, the girl asked her dad to say cheese.

- A. The girl told her dad to say cheese when she was taking photographs.
- B. "Say cheese, Dad," asked the girl, as she was taking the photograph.
- C. "Say cheddar, Dad!" shouted the girl.
- D. The girl asked her dad if she could take photographs of cheese.



SELF-REFLECTION

Take some time to reflect on your review test experience. Although they may sometimes feel stressful, exams can also be valuable learning opportunities.

Your preparation

How confident did you feel going into the exam?



Your performance

Did you have enough time to answer all the questions in the exam?

☐
yes☐
no

Which topic were you most confident answering?

3D Shapes

Comprehension

Fractions

Direct & Reported Speech

| |
|--|
| |
| |
| |
| |

Which topic would you like more practice on?

3D Shapes

Comprehension

Fractions

Direct & Reported Speech

| |
|--|
| |
| |
| |
| |

What might you do differently next time?

In preparation for your next exam, write down one thing you will keep doing and one thing you will change for next time.

| Keep | Change |
|------|--------|
| | |



REVIEW TEST 6

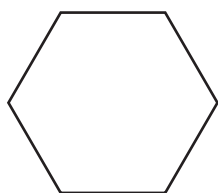
You have **30 minutes** to complete the review test.

Conversion & Measurement

1. How many millilitres are there in one litre?
A. 10ml B. 500ml C. 100ml D. 1,000ml E. 1ml
2. If a jug can hold 3 litres of water, how many millilitres can it hold?
A. 3ml B. 0.3ml C. 3,000ml D. 300ml E. 30ml
3. Convert 8 centimetres to millimetres.
A. 80mm B. 8mm C. 800m D. 0.8mm E. 18mm
4. My dad is 1.8m tall. How many centimetres tall is he?
A. 18cm B. 180cm C. 1.8cm D. 1,800cm E. 0.18cm
5. Marie has a piece of fabric that is 2 metres long. She wants to cut it into smaller pieces, each measuring 25 centimetres. How many pieces can she get from the fabric?
A. 50 B. 17 C. 10 D. 4 E. 8

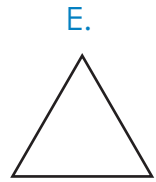

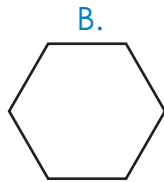
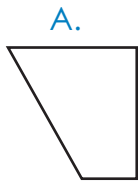
Symmetry

6. Which of the following letters has no lines of symmetry?
A. H B. O C. R D. U E. M
7. How many lines of symmetry does a regular hexagon have?



- A. 4 B. 3 C. 5 D. 6 E. 8

8. Which shape has no lines of symmetry?



9. Which of the following numbers has 2 lines of symmetry?

A. 2

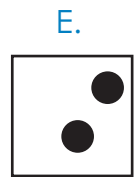
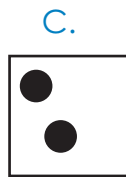
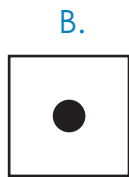
B. 3

C. 9

D. 6

E. 8

10. Which of the following figures has a vertical line of symmetry?



Editing

In the questions below, choose the option that contains a spelling, grammar or punctuation error and requires editing.

11. My brother's dog is called bobby. On Sunday we took her to the park.

A.

B.

C.

D.

12. Sameera and me are going to the fair on Saturday.

A.

B.

C.

D.

13. "Do we have any money to buy ice cream!" Logan asked his mother.

A.

B.

C.

D.

14. Yesterday, we went to the zoo. I saw monkeys elephants, giraffes and lions.

A.

B.

C.

D.

15. I am going on holiday to france with my family.

A.

B.

C.

D.

Continuous Writing

In the heart of a mystical forest, where fireflies danced like tiny stars and the trees whispered secrets to one another, there lived a daring young rabbit named Rosie. One moonlit night, as she nibbled on a delicious carrot, she overheard a hushed conversation between a wise old owl and a mischievous racoon. They spoke of hidden treasure buried deep within the enchanted forest, guarded by riddles and protected by ancient magic.

Continue the story.

Mark Scheme (10 marks)

- 1 mark for clear and effective writing that relates to the task.
- 2 marks for explaining events in good detail.
- 1 mark for ambitious vocabulary used appropriately.
- 1 mark for correct use of verb tenses throughout.
- 1 mark for varied and effective sentence structure.
- 1 mark for organising writing into logical paragraphs.
- 1 mark for good use of conjunctions and connectives.
- 1 mark for correct grammar and punctuation.
- 1 mark for good spelling.

Planning:

[illegible]



SELF-REFLECTION

Take some time to reflect on your review test experience. Although they may sometimes feel stressful, exams can also be valuable learning opportunities.

Your preparation

How confident did you feel going into the exam?



Your performance

Did you have enough time to answer all the questions in the exam?

☐
yes☐
no

Which topic were you most confident answering?

Conversion & Measurement

Symmetry

Editing

Continuous Writing

| |
|--|
| |
| |
| |
| |

Which topic would you like more practice on?

Conversion & Measurement

Symmetry

Editing

Continuous Writing

| |
|--|
| |
| |
| |
| |

What might you do differently next time?

In preparation for your next exam, write down one thing you will keep doing and one thing you will change for next time.

| Keep | Change |
|------|--------|
| | |



REVIEW TEST 7

You have **30 minutes** to complete the review test.

Decimals

In the questions below, choose the set of decimals that is ordered from smallest to largest.

1.
 - A. 0.001, 0.06, 0.03, 0.5, 0.4
 - B. 0.5, 0.03, 0.001, 0.06, 0.4
 - C. 0.001, 0.03, 0.06, 0.4, 0.5
 - D. 0.06, 0.001, 0.4, 0.5, 0.03
2.
 - A. 1.089, 1.258, 1.26, 1.62, 1.76
 - B. 1.089, 1.76, 1.26, 1.62, 1.258
 - C. 1.258, 1.62, 1.26, 1.089, 1.76
 - D. 1.76, 1.26, 1.258, 1.089, 1.62,
3.
 - A. 0.003, 0.63, 0.12, 0.03, 0.6
 - B. 0.03, 0.12, 0.003, 0.6, 0.63
 - C. 0.03, 0.003, 0.63, 0.12, 0.6
 - D. 0.003, 0.03, 0.12, 0.6, 0.63

In the questions below, round each number to the nearest whole number.

4. **0.4**
 - A. 0
 - B. 1.5
 - C. 2
 - D. 4
 - E. 0.5
5. **18.8**
 - A. 18
 - B. 20
 - C. 18.5
 - D. 19
 - E. 15

Round the number below to one decimal place.

6. **12.6345**

A. 12.6

B. 12

C. 12.63

D. 12.7

E. 12.5

In the questions below, choose the correct answer to the calculation.

7. **$6.7 \times 10 =$**

A. 0.67

B. 670

C. 6,700

D. 607

E. 67

8. **$22.02 \times 100 =$**

A. 222

B. 202

C. 2,202

D. 2.020

E. 22

9. **$34 \div 10 =$**

A. 0.34

B. 0.034

C. 340

D. 3.4

E. 0.340

10. **$127 \div 100 =$**

A. 0.127

B. 1.27

C. 12.7

D. 0.0127

E. 1270

Synonyms & Antonyms

11. Which word is a synonym of the word **accurate**?

A. acute

B. similar

C. correct

D. vague

E. wrong

12. Which word is a synonym of the word **leap**?

A. frog

B. jump

C. pad

D. sit

E. run

13. Which word is an antonym of the word **accept**?

A. accent

B. take

C. correct

D. reject

E. include

14. Which word is an antonym of the word **fear**?

A. envious

B. dubious

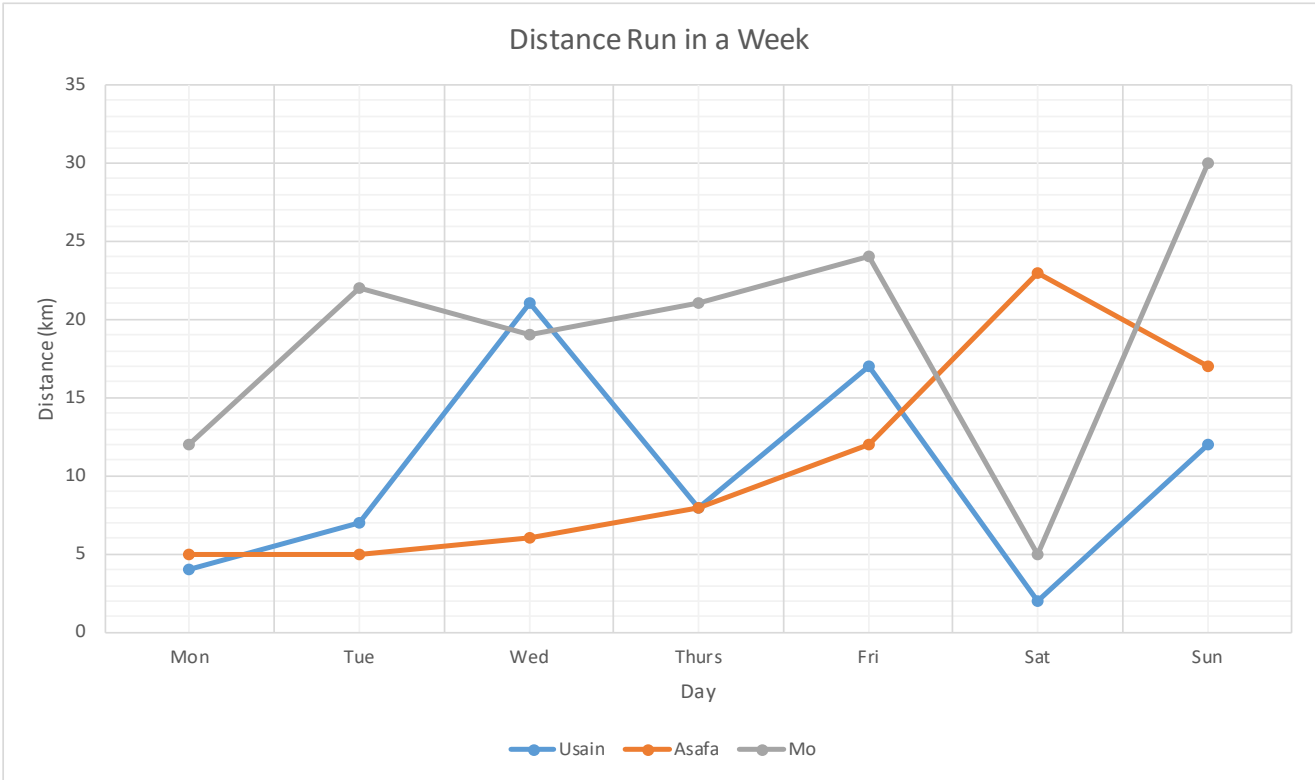
C. terrified

D. scared

E. courage

Interpreting Data

Look at the line graph below and decide whether the statements are true or false.



| | | True | False |
|-----|---|------|-------|
| 15. | Asafa ran the most km on Wednesday. | | |
| 16. | Mo ran the most km on Sunday. | | |
| 17. | Over the weekend Mo ran 35km. | | |
| 18. | On Tuesday Asafa ran 5 miles. | | |
| 19. | Mo ran more km than Usain and Asafa combined on Monday. | | |
| 20. | Asafa and Usain ran the same distance on Thursday. | | |
| 21. | The scale of the y axis is 10km. | | |
| 22. | The x axis is labelled in months. | | |
| 23. | The legend depicts distance run. | | |
| 24. | On 4 days Mo ran more than 20km. | | |

Essay Writing

Take a look at the statement below.

**The school week should be four days long, giving all students a three day weekend.
Do you agree with this statement?**

- What is your opinion/main argument?
- What is the opposing argument?
- How will you structure the arguments into paragraphs?
- Tip: Try to give examples/reasons to support arguments.

You should write no more than 250 words in support of, or in opposition to, this idea.

Mark Scheme (10 marks)

- 1 mark for starting the text with an introduction explaining the debate.
- 1 mark for a clear structure - introduction, middle section and conclusion.
- 1 mark for a conclusion that summarises the issue and the writer's position.
- 1 mark for including facts / reasoned thoughts that support the writer's point of view.
- 1 mark for addressing the other side of the argument.
- 1 mark for dividing the text into logical paragraphs.
- 1 mark for linking points using connectives.
- 1 mark for good use of grammar.
- 1 mark for good use of punctuation.
- 1 mark for accurate spelling.

Planning:

This image shows a single sheet of white paper with horizontal ruling lines. The lines are evenly spaced and run across the width of the page. There are no margins, text, or other markings on the paper.



SELF-REFLECTION

Take some time to reflect on your review test experience. Although they may sometimes feel stressful, exams can also be valuable learning opportunities.

Your preparation

How confident did you feel going into the exam?



Your performance

Did you have enough time to answer all the questions in the exam?

☐
yes☐
no

Which topic were you most confident answering?

Decimals

Synonyms & Antonyms

Interpreting Data

Essay Writing

Which topic would you like more practice on?

Decimals

Synonyms & Antonyms

Interpreting Data

Essay Writing

What might you do differently next time?

In preparation for your next exam, write down one thing you will keep doing and one thing you will change for next time.

| Keep | Change |
|------|--------|
| | |



REVIEW TEST 8

You have **20 minutes** to complete the review test.

2D Shapes: Circles, Angles & Bearings

1. Complete the sentence below. Choose the correct answer from the options.

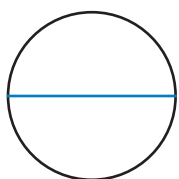
A circle has a total of _____ all the way around the centre.

A. 90° B. 145° C. 160° D. 360° E. 180°

2. What is the distance all the way around a circle called?

A. circumference B. diameter C. arc D. chord E. radius

3. What is the part of the circle highlighted in blue called?



A. radius B. arc C. chord D. vertex E. diameter

4. The diameter of a circle is 7cm. What is the radius of the circle?

A. 14cm B. 3.5cm C. 4cm D. 28cm E. 18cm

5. If you are facing east and you turn 90° clockwise, in which direction are you facing now?

A. south east B. north C. north east D. south E. west

Spelling: Plurals

6. Which of these spellings is the correct plural form for '**box**'?

A. boxes B. box C. boxs D. box's E. boxies

7. Which of these spellings is the correct plural form for '**mouse**'?

A. mouse B. mouses C. mousies D. mice E. mouseys

8. Which of these spellings is the correct plural form for '**planet**'?
- A. planetes B. planet C. planets D. planeties E. planet's
9. Which of these spellings is the correct plural form for '**book**'?
- A. book B. bookes C. bookies D. bookys E. books
10. Which of these spellings is the correct plural form for '**sheep**'?
- A. sheeps B. sheepies C. sheepys D. sheep E. sheepes

Problem Solving

11. Estelle and Sam are doing a sponsored bake sale for charity. Estelle raised £52 for charity, and Sam raised four times as much. How much money did Sam raise?
- A. £200 B. £104 C. £208 D. £238 E. £198
12. Indie lives four times further away from Newcastle than Mira, but Mira lives five times further away than Alisha. If Indie lives 32 miles from Newcastle, how far away does Mira live?
- A. 6 miles B. 8 miles C. 12 miles D. 16 miles E. 24 miles
13. Gabrielle bought 5 books, each costing £3.30. She paid with £20.00. How much change did she get?
- A. £3.50 B. £6.80 C. £4.20 D. £16.50 E. £4.80
14. Ruben and Kofi are doing a sponsored 12-mile run for charity. Ruben can run at 6 miles per hour. How long will he take to finish the sponsored run?
- A. 1 hour 2 minutes B. 1 hour 12 minutes C. 70 minutes D. 2 hours E. 78 minutes
15. Omari arrived at work at 8:15am. Jude had set off at 8:05am and arrived at work 20 minutes after Omari. How long did it take him to get there?
- A. 25 minutes B. 30 minutes C. 20 minutes D. 35 minutes E. 40 minutes

Adverbs & Adverbials

16. Choose the adverb from the sentence below.

The sports game on TV was starting soon and I wanted to see it.

- A. sports B. game C. starting D. soon E. wanted

17. Choose the adverb from the sentence below.

The fans felt that it was not entirely a fair decision.

- A. fans B. felt C. entirely D. fair E. decision

18. Choose the adverb from the sentence below.

Laura detests getting up early.

- A. Laura B. detests C. getting D. up E. early

19. Choose the sentence that contains a fronted adverbial.

A. Running across the park, the children became very muddy.

B. It was great fun going to the fair.

C. It snowed so much we couldn't go to school.

D. I prefer to have a bath instead of a shower.

20. Choose the sentence that contains a fronted adverbial.

A. I like to take my dog for long walks.

B. I like to draw pictures in my spare time.

C. As quickly as possible, I ran home from school.

D. Matilda and I had to leave for the train station straight away.



SELF-REFLECTION

Take some time to reflect on your review test experience. Although they may sometimes feel stressful, exams can also be valuable learning opportunities.

Your preparation

How confident did you feel going into the exam?



Your performance

Did you have enough time to answer all the questions in the exam?

☐

yes

☐

no

Which topic were you most confident answering?

2D Shapes

| |
|--|
| |
| |
| |
| |

Spelling: Plurals

Problem Solving

Adverbs & Adverbials

Which topic would you like more practice on?

2D Shapes

| |
|--|
| |
| |
| |
| |

Spelling: Plurals

Problem Solving

Adverbs & Adverbials

What might you do differently next time?

In preparation for your next exam, write down one thing you will keep doing and one thing you will change for next time.

| Keep | Change |
|------|--------|
| | |

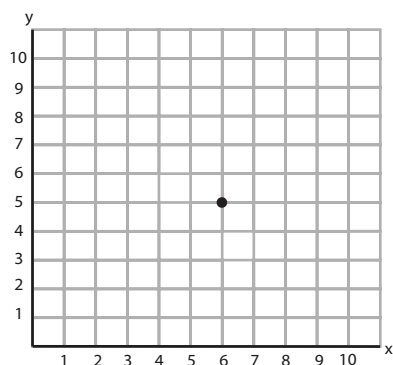


REVIEW TEST 9

You have **20 minutes** to complete the review test.

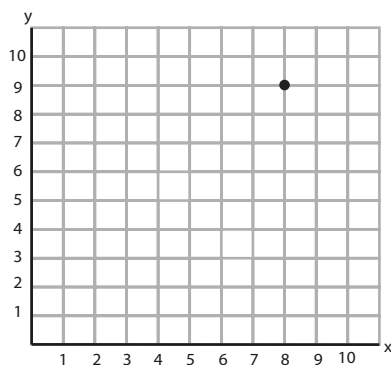
Transformations, Position & Co-ordinates

1. What are the co-ordinates of the point?



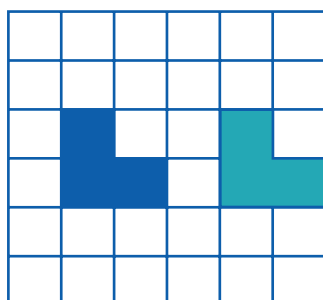
- A. (5,5) B. (5,6) C. (6,5) D. (4,5) E. (6,6)

2. What are the co-ordinates of the point?



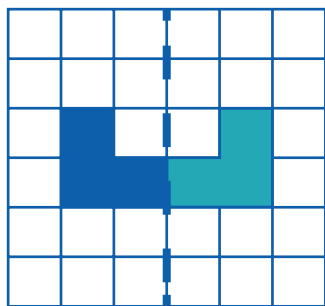
- A. (7,8) B. (8,9) C. (9,8) D. (10,9) E. (9,9)

3. What transformation can be seen in this image?



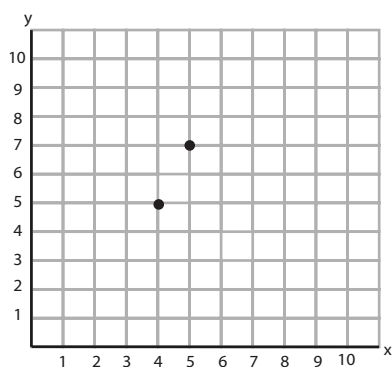
- A. enlargement B. reflection C. rotation D. translation

4. What transformation can be seen in this image?



- A. enlargement B. translation C. rotation D. reflection

5. If the point (6,5) is plotted on the graph, which shape would it form?



- A. square B. circle C. rectangle D. triangle E. hexagon

Spelling: Silent Letters

6. Write the correct spelling of the word in the brackets.

I _____ (climed) to the top of a steep hill to see the amazing view.

7. Write the correct spelling of the word in the brackets.

My dad asked me to _____ (fasen) my seatbelt before we set off.

8. Write the correct spelling of the word in the brackets.

He rubbed the _____ (nuckle) of his ring finger.

9. Write the correct spelling of the word in the brackets.

The colours of the beautiful _____ (autum) leaves make it such a pretty season.

10. Write the correct spelling of the word in the brackets.

The skin on her cheeks and around her eyes were starting to _____ (rinkle).

Percentages

In the questions below, choose the equivalent percentage for the fractions and decimals.

11. $\frac{9}{10}$ 0.9

- A. 10% B. 90% C. 5% D. 25% E. 19%

12. $\frac{4}{5}$ 0.8

- A. 18% B. 45% C. 80% D. 8% E. 15%

13. $\frac{1}{10}$ 0.1

- A. 1% B. 11% C. 20% D. 10% E. 30%

14. $\frac{1}{5}$ 0.2

- A. 20% B. 5% C. 25% D. 2% E. 10%

15. $\frac{1}{3}$ 0.33

- A. 13% B. 3% C. 15% D. 23% E. 33%

Tenses

In the questions below, select the correct verb to complete the sentence.

16. I _____ my bike to school everyday.

- A. ride B. riding C. rode

17. Yesterday we _____ about verb tenses at school.

- A. learn B. learning C. learnt

18. I promised my parents that I will _____ for my exams whilst we are on holiday.

- A. study B. studying C. studied

19. I will be _____ my award for outstanding contributions to charity work next week.

- A. receive B. receiving C. received

20. She often _____ shopping at the weekend.

- A. go B. going C. goes

Punctuation

In the questions below, look for a punctuation mistake in the sentence. Select the group of words with the mistake. If there is no mistake, choose N.

21. What is the capital city of France!

| | | | | |
|---|---|---|---|---|
| A | B | C | D | N |
|---|---|---|---|---|

22. Tara chose ham, mushrooms sweetcorn and onion for her pizza.

| | | | | |
|---|---|---|---|---|
| A | B | C | D | N |
|---|---|---|---|---|

23. If we save up enough money, do you think we could go on holiday?

| | | | | |
|---|---|---|---|---|
| A | B | C | D | N |
|---|---|---|---|---|

24. The house on the left is mine Pull onto the drive when you arrive.

| | | | | |
|---|---|---|---|---|
| A | B | C | D | N |
|---|---|---|---|---|

25. Kai was looking forward to university but he knew he would miss home.

| | | | | |
|---|---|---|---|---|
| A | B | C | D | N |
|---|---|---|---|---|

Ratio

26. What is the ratio of squares to circles?



- A. 5:3 B. 3:4 C. 3:3 D. 4:3 E. 2:4

27. Carry on this sequence of ratios: **3:10, 4:15, 5:20, 6:25, ?**

A. 6:30

B. 9:35

C. 7:30

D. 6:5

E. 5:25

28. There are 24 elephants and 40 giraffes at the zoo. What is the ratio of elephants to giraffes in its simplest form?

A. 24:40

B. 12:20

C. 3:5

D. 1:2

E. 4:10

29. At a farm there are some pigs and some cows. The ratio of pigs to cows is 3:1. If there are four cows, how many pigs are there?

A. 9

B. 12

C. 6

D. 4

E. 1

30. What is 6:42 in its simplest form?

A. 1:7

B. 1:5

C. 3:21

D. 2:12

E. 1:8



SELF-REFLECTION

Take some time to reflect on your review test experience. Although they may sometimes feel stressful, exams can also be valuable learning opportunities.

Your preparation

How confident did you feel going into the exam?



Your performance

Did you have enough time to answer all the questions in the exam?

☐
yes☐
no

Which topic were you most confident answering?

Transformations, Position & Co-ordinates

Spelling: Silent Letters

Percentages

Tenses

Punctuation

Ratio

| |
|--|
| |
| |
| |
| |
| |
| |

Which topic would you like more practice on?

Transformations, Position & Co-ordinates

Spelling: Silent Letters

Percentages

Tenses

Punctuation

Ratio

| |
|--|
| |
| |
| |
| |
| |
| |

What might you do differently next time?

In preparation for your next exam, write down one thing you will keep doing and one thing you will change for next time.

| Keep | Change |
|------|--------|
| | |



FULL COURSE REVIEW

You have **30 minutes** to complete the review test.

Spelling: Prefixes, Suffixes & Roots

1. What is the root word in the word below?

misbehave

A. mis B. be C. have D. behave

2. Circle the correct prefix for the underlined word in the sentence.

There are very few foods that I like.

A. mis B. pre C. un D. ir E. dis

3. Circle the correct prefix for the underlined word in the sentence.

It was almost visible under the dim light.

A. in B. mis C. un D. re E. il

4. Circle the correct suffix for the underlined word in the sentence.

I have been told that moving house can be really stress.

A. ful B. ness C. ly D. ment E. less

5. Circle the correct suffix for the underlined word in the sentence.

I will buy you a replace for the vase I broke.

A. ful B. ness C. ly D. ment E. less

Nouns

Identify the abstract noun in the sentence. Circle the correct answer.

6. **Honesty is always the best policy.**

A. Honesty B. always C. the D. best E. policy

In the questions below, choose the correct collective noun for the plural word in bold.

7. **puppies**

A. school B. flock C. colony D. litter E. army

8. lions

- A. colony B. school C. pride D. pod E. swarm

9. shoes

- A. pack B. flock C. class D. pair E. team

10. players

- A. team B. catch C. string D. pack E. army

Adjectives

11. Choose the **two** adjectives in the sentence below.

Do you prefer green or red grapes?

- A. Do B. prefer C. green D. red E. grapes

12. Choose the adjective in the sentence below.

My sister knitted me a beautiful jumper.

- A. sister B. knitted C. me D. beautiful E. jumper

13. Choose the adjective in the sentence below.

Some animals use camouflage to help protect themselves from dangerous predators.

- A. animals B. camouflage C. help D. protect E. dangerous

14. Choose the **two** adjectives in the sentence below.

Arctic foxes have white fur in the winter and brown fur in the summer.

- A. foxes B. white C. winter D. brown E. summer

15. Choose the adjective in the sentence below.

A young elephant stays with its mother for up to ten years.

- A. young B. elephant C. stays D. mother E. ten

Decimals

16. Round 2.67 to the nearest whole number.

- A. 2 B. 26 C. 2.60 D. 3 E. 2.70

17. $4.6 \times 10 =$

- A. 46 B. 460 C. 4.06 D. 4,600 E. 0.46

18. Round 17.894 to one decimal place.

- A. 17 B. 17.89 C. 17.9 D. 17.8 E. 18

19. $406 \div 1,000 =$

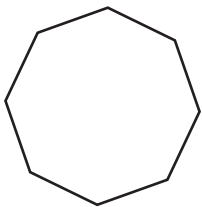
- A. 0.406 B. 4,060 C. 0.0406 D. 4.06 E. 40.6

20. $62.4 \div 100 =$

- A. 624 B. 0.624 C. 0.062 D. 6.24 E. 6,240

2D Shapes: Triangles, Quadrilaterals & Polygons

Questions 13 and 14 refer to the shape below.



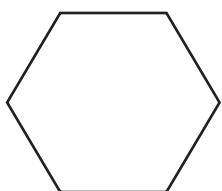
21. What is the name of this regular polygon?

- A. heptagon B. octagon C. hexagon D. pentagon E. nonagon

22. How many vertices does the shape have?

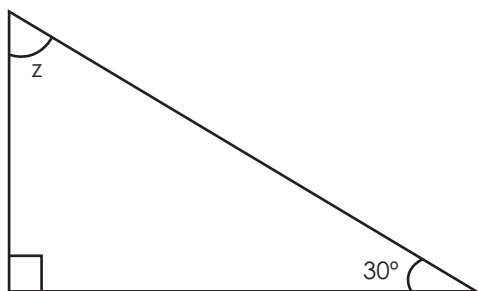
- A. 5 B. 7 C. 8 D. 6 E. 9

23. What is the name of this regular polygon?



- A. hexagon B. heptagon C. pentagon D. rhombus E. trapezium

Questions 24 and 25 refer to the triangle below.



24. What type of triangle is shown above?

- A. isosceles B. acute C. right-angle D. scalene E. equilateral

25. What is the size of the angle marked z ?

- A. 45° B. 65° C. 240° D. 60° E. 70°

Comprehension

Read the information below about Komodo dragons and use the comprehension skills you have learnt to answer the questions that follow.

The Komodo dragon is the largest living lizard. A fierce predator, it can kill prey as large as a water buffalo. Hunted almost to extinction after Western scientists discovered the reptile on Komodo Island, Indonesia, in 1912, this species is currently protected under Indonesian law.

The Komodo dragon is a type of monitor lizard. Like other monitors, it has a long head and neck, a heavy body and a long tail. But the Komodo dragon is larger than all other lizards. It can reach a length of 3 metres. Some males weigh more than 135 kilograms.

The skin of a Komodo dragon is scaly and grey-brown in colour. Its tongue is yellowish and forked (split in two at the end). Like a snake, the lizard flicks its tongue in and out to get information about its surroundings.

Komodo dragons can run as fast as 13 miles per hour. They also are good climbers and swimmers. These lizards often eat carrion, or animals that are already dead. But they also hide along trails, waiting to pounce on passing cattle, deer, pigs or other animals. Adults even hunt smaller Komodo dragons. They use their sharp, curved teeth and claws to bite and tear their prey.

Female Komodo dragons lay eggs in deep burrows. The eggs hatch in April or May. The newly hatched young are about 45 centimetres long. They live in trees for several months. Komodo dragons may live for about 30 years.

26. In which year did scientists discover the Komodo dragon on Komodo Island?
- A. 1912 B. 1917 C. 1913 D. 1935 E. 1945
27. What length can a Komodo dragon reach?
- A. 135cm B. 13m C. 45cm D. 3m E. 30m
28. What colour is the skin of a Komodo dragon?
- A. brown-green B. orange C. grey-brown D. grey-green E. blue
29. How long do Komodo dragons live for?
- A. 3 years B. 30 years C. 13 years D. 45 years E. 135 years

Place Value

30. What is the value of the underlined digit?

4,382

- A. 8 B. 18 C. 80 D. 800 E. 8,000

31. What is the value of the underlined digit?

7,290

- A. 7 B. 17 C. 70 D. 700 E. 7,000

32. Round the number below to the nearest 1,000.

2,554

- A. 2,000 B. 2,500 C. 1,500 D. 3,000 E. 4,000

Fractions

In the questions below, calculate the fractions of the amounts.

33. $\frac{1}{4}$ of 32

- A. 8 B. 12 C. 6 D. 16 E. 20

34. $\frac{2}{3}$ of 18

- A. 6 B. 10 C. 12 D. 14 E. 4

Choose the fraction with the highest value.

35. $\frac{1}{2}$ $\frac{5}{8}$ $\frac{1}{4}$ $\frac{3}{4}$ $\frac{1}{8}$

A. $\frac{1}{2}$

B. $\frac{5}{8}$

C. $\frac{1}{4}$

D. $\frac{3}{4}$

E. $\frac{1}{8}$

Factors & Multiples

36. 2 and 12 are factors of 36. Circle the **two** numbers below that are also factors of 36.

A. 4

B. 5

C. 8

D. 10

E. 18

37. Which of the following numbers is the next multiple of 7? **7, 14, 21, 28, 35, ?**

A. 70

B. 42

C. 54

D. 84

E. 77

Alliteration & Onomatopoeia

In the sentence below, choose the word that forms the **alliteration**.

38. The snake slithers _____ in the sand.

A. quickly

B. quietly

C. loudly

D. weakly

E. slowly

Choose the **onomatopoeic word** to complete the sentence.

39. The mouse _____ as it ran across the room.

A. squeaked

B. sang

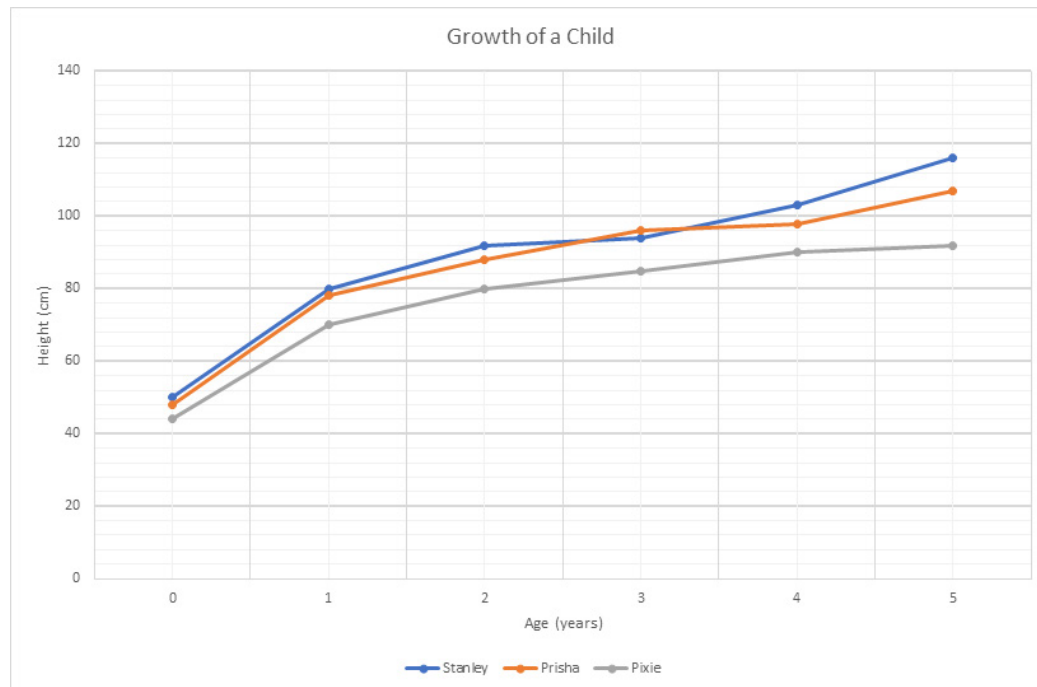
C. bounced

D. slipped

E. tripped

Interpreting Data

Look at the line graph below and answer the questions that follow.



40. Who was the tallest when they were 3 years old?
- A. Stanley B. Prisha C. Pixie
41. How tall was Pixie when she was 2?
- A. 88cm B. 80cm C. 92cm D. 68cm E. 96cm
42. What is the difference in height between Pixie and Prisha when they were born?
- A. 1cm B. 2cm C. 3cm D. 4cm E. 5cm

Problem Solving

In the questions below, choose the correct answer to the problem.

43. The temperature of a substance in a chemistry experiment is recorded at -8° . If the temperature is increasing at a rate of 3 degrees per minute, what will the temperature be in 10 minutes?
- A. -11° B. -38° C. -5° D. 16° E. 22°

- 44.** At a theme park you go on your first ride at 12:45pm. You go on a ride every 11 minutes. At what time do you go on your fourth ride?
- A. 12:56pm B. 1:07pm C. 1:18pm D. 1:22pm E. 1:36pm
- 45.** Katrina can jump four times higher than Sylvia, but Edward can only jump half the height of Katrina. If Sylvia can jump 4m high, how high can Edward jump?
- A. 16m B. 12m C. 2m D. 8m E. 7m
- 46.** Envelopes are sold in packs of five. I need 37 envelopes. How many packs should I buy?
- A. 8 packs B. 5 packs C. 4 packs D. 6 packs E. 7 packs
- 47.** A photo album has 42 pages. Each page can hold seven photos. How many photos can each album hold?
- A. 252 photos B. 336 photos C. 294 photos D. 6 photos E. 49 photos
- 48.** A library has 50 shelves. Each shelf has 5 books. How many books are in the library altogether?
- A. 55 books B. 10 books C. 200 books D. 250 books E. 45 books
- 49.** One battery costs 35p and I bought two. If I paid with a five-pound note, how much change did I receive?
- A. £4.65 B. £4.30 C. £3.30 D. £3.65 E. £4.40
- 50.** At a fabric shop I bought 125 metres of yellow fabric, 23 metres of purple fabric and 12 metres of green fabric. How much fabric did I buy altogether?
- A. 162 metres B. 145 metres C. 155 metres D. 148 metres E. 160 metres



COURSE REFLECTIONS

Take some time to reflect on this course and answer the questions below.

1. How confident do you feel moving on to the next course?



2. What did you enjoy the most?

3. What were your least favourite parts of the course?

4. What challenges did you face?

5. How did you overcome these challenges?

6. Which areas would you like to continue to practise in the course next year?



This image shows a single sheet of white paper with horizontal ruling lines. The lines are evenly spaced and run across the width of the page. There are no margins, text, or other markings on the paper.

[illegible]



SPELLING LOG

Record any new spellings that you wish to practise in the table below.

| Word | Sentence (word in context) |
|------|----------------------------|
| | |
| | |
| | |
| | |
| | |
| | |
| | |
| | |
| | |
| | |
| | |
| | |
| | |
| | |
| | |
| | |
| | |

| Word | Sentence (word in context) |
|------|----------------------------|
| | |
| | |
| | |
| | |
| | |
| | |
| | |
| | |
| | |
| | |
| | |
| | |
| | |
| | |
| | |
| | |
| | |
| | |
| | |
| | |

Explore

LEARNING

