
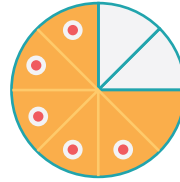



Fractions

Year 4 / P5

Activity 1

Draw lines to match the fractions to the correct image using different colours for each one!



$$\frac{2}{3}$$

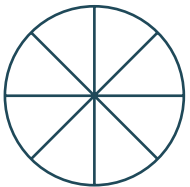
$$\frac{5}{8}$$

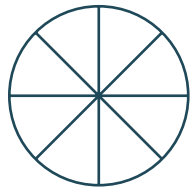
$$\frac{1}{2}$$

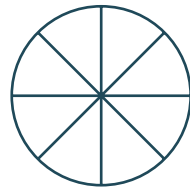
$$\frac{3}{4}$$

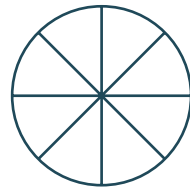
Activity 2

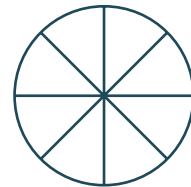
Make your own fractions by shading in the circles below and write the answer next to them.











Activity 3

Order these fractions from smallest to largest.

$$\frac{98}{100}$$

$$\frac{2}{8}$$

$$\frac{1}{4}$$

$$\frac{7}{10}$$

$$\frac{1}{3}$$
