

# Money

Year 3/ P4

## Activity 1

Calculate the total amount of money needed to pay for each group of items.

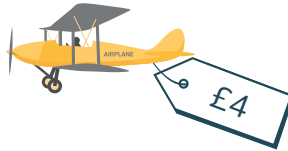
1




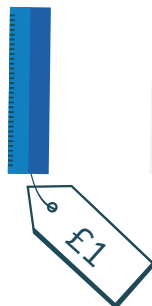
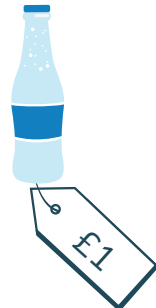

2




3




4



# Money

Year 3/ P4

## Activity 2

If you paid for each of the above groups with a £10 note, how much change would you get?

1

3

2

4

## Activity 3

You have a budget of £100. How many different combinations of items could you buy?

Potential items:



£10



£85



£35



£12



£9