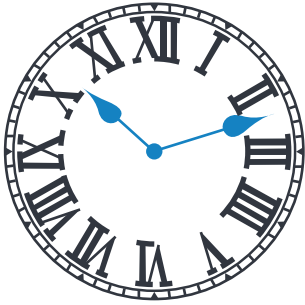

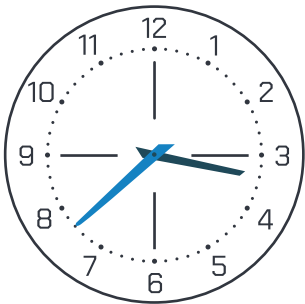
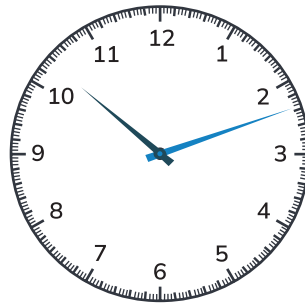


## Activity 1

Write the times shown on these clocks. Can you write them in digital and analogue?


  
 : 

  
 : 

  
 : 

  
 : 

## Activity 2

Estimate how long each of these activities will take. Then time yourself and calculate the difference.



Activity	Estimation	Difference
Tying a shoelace		
Walking around your kitchen 10 times		
Doing 10 squats		
Reading a chapter of a book		
Washing the dishes		