

Money

Year 2 / P3

Activity 1

Label the coins and notes.

two pounds

two pence

five pence

five pounds

twenty pounds

twenty pence

one pound





Activity 2

Check the box containing the largest value of money.


1



2



3

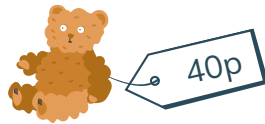


Money

Year 2 / P3

Activity 3

For each item how much change would you get from £1?



Activity 4

For each item how much change would you get from 50p?

